



DELHI PUBLIC SCHOOL, BHILAI

Date : 04.09.2019

MID-FIRST EXAMINATION, 2019

Time : 1½ Hrs.

Class - VI

SUBJECT – INFORMATION AND
COMMUNICATION TECHNOLOGY

M.M. 30

Fill in the blanks. (Question no. 1 to 3 carry 1 mark each)

- Q.01 A Printer produces a pattern of raised dots.
Q.02 The Cells dialog box has all the options of Formatting toolbar.
Q.03 Rearranging the data in a specified order is called

Answer the following questions.

Question No. 4 to 6 carry 2 marks each.

Question No. 7 to 9 carry 3 marks each.

Question No. 10 to 12 carry 4 marks each.

- Q.04 How is a smart card different from a magnetic strip card?
Q.05 How will you put a long text in a cell on multiple lines?
Q.06 Which feature is used to quickly enter a series of months or weekdays?
Q.07 What is software? Name its two main categories.
Q.08 Write steps to format text CH4 as CH₄.
Q.09 What is a filter? What are its three types?
Q.10 Name any two input devices and two output devices with their use.
Q.11 How will you add a cell style Font Size – 16, Font Color – Red and Background Color – Green, Font Face- Arial by the name MyTitle in the list?
Q.12 How will you create your own list of seven (rainbow) colors – Violet, Indigo, Blue, Green, Yellow, Orange, and Red?

ॐॐॐॐॐॐ



DELHI PUBLIC SCHOOL, BHILAI

Date : 03.09.2019
Class - VI

FIRST-TERM EXAMINATION, 2019
SUBJECT – GENERAL KNOWLEDGE

Time : 50 Min.
M.M. 50

Name : _____ Roll No. : _____ Class & Section _____

Invigilator's Signature _____

Note :

- All the questions are compulsory.
- Each question carries 1 mark.

(I) Fill in the blanks :

(1×10=10)

- (01) This bird remains in air for most of the times. After leaving the nest, it remains in air for 3 to 10 years. It lands only to breed. _____.
- (02) This is the only part of the human body that cannot heal or repair on its own _____.
- (03) This is considered to be one of the most expensive gemstones in the world. _____.
- (04) It is the capital city of Greece and is also its largest city _____.
- (05) This is the longest international border in the world _____.
- (06) Saint of the Gutters _____.
- (07) This body part never grows _____.
- (08) People hang from this type of large kite and enjoy flying. _____.
- (09) The highest mountain peak. _____.
- (10) This is the only bird which hunts by its sense of smell. _____.

(II) Match Column A with Column B :

(1×10=10)

Column A	Column B	
(01) Strongest muscle in the human body	(a) Varanasi	1. _____
(02) Oldest inhabited city of India	(b) Jordan	2. _____
(03) Ichthyology	(c) Nile	3. _____
(04) The lowest river	(d) Tongue	4. _____
(05) Ships and their equipment	(e) Jaya Prakash Narayan	5. _____
(06) Lok nayak	(f) Earth and its composition	6. _____
(07) Longest river	(g) Marine	7. _____
(08) Ethology	(h) Fish	8. _____
(09) Eyes	(i) Nervous System	9. _____
(10) Neurology	(j) Ophthalmologists	10. _____

Contd...2

(III) Name the Medical specialists :

(1×10=10)

- (01) Infants and children _____
- (02) Brains and nervous system _____
- (03) Skin problem _____
- (04) Diet _____
- (05) Teeth _____

Name the Branches of Engineering:

- (06) Aircrafts _____
- (07) Motor vehicles _____
- (08) All kinds of machines _____
- (09) Computer and its software _____
- (10) Fibres and fabrics _____

(IV) Answer the following

Name the Indian musician (who played traditional musical instrument) :

(1×10=10)

- (01) Santoor _____
- (02) Sarangi _____
- (03) Tabla _____
- (04) Sitar _____
- (05) Sehnai _____

Name the following branches of Science and the subject they deal with.

- (06) Biology _____
- (07) Dendrology _____
- (08) Neurology _____
- (09) Ornithology _____
- (10) Entomology _____

(V) Answer the following

Name the rivers on which the following cities are located:

(1×10=10)

- (01) Ahmedabad (Gujrat) _____
- (02) Kanpur (Uttar Pradesh) _____
- (03) Jabalpur (Madhya Pradesh) _____
- (04) Kolkata (West Bengal) _____
- (05) New Delhi (New Delhi) _____

Current Affairs:

- (06) Who is the Governor of Chhattishgarh? _____
- (07) In 2019, India celebrated its _____ Independence Day.
- (08) Who is the chief minister of Tamilnadu ? _____
- (09) International Tribal Day. _____
- (10) Name the female athletic of India who recently bagged 5 gold medals in 400 ms run? _____

दिल्ली - पब्लिक - स्कूल , मिलाईनगरम्



अर्द्धवार्षिकी परीक्षा

संस्कृतम्

कक्षा - षष्ठी

दिनांक: - 06.09.2019

समय: - 1:30 होरा

पूर्णाङ्कः 40

नाम _____

कक्षा /वर्ग: _____

अनुक्रमाङ्कः _____

प्रासाङ्कः _____

वीक्षकस्य हस्ताक्षरम् _____

प्रश्न 1) मञ्जूषातः चित्वा प्रश्नानाम् उत्तराणि पूर्णवाक्येन लिखत -

1X4 = 04

मेरीनाटः, नारिकेलफलेभ्यः, बालुकाभिः, जुहुतटे

क. कोष्ठितटः केभ्यः गायते ? _____

ख. भारतस्य दीर्घतमः समुद्रतटः कः ? _____

ग. जनाः कुत्र स्वैरं विहरन्ति ? _____

घ. जनाः काभिः जलविहारं कुर्वन्ति ? _____

प्रश्न 2. मञ्जूषातः उचितक्रियापदं चित्वा रिक्तस्थानानि पूरयत -

गायति, पठतः, चलन्ति, गर्जतः

¼ X 4 = 02

(क) गजाः _____ । (ग) बालकाः _____ ।

(ख) सिंहाः _____ । (घ) गायकः _____ ।

प्रश्न 3. मञ्जूषातः पदानि चित्वा रिक्तस्थानानि पूरयत -

¼ X 4 = 02

लेखिका बालकः सिंहाः त्रिचक्रिका

क. _____ पश्यति । ख. _____ लिखति ।

ग. _____ गर्जन्ति । घ. _____ चलति ।

प्रश्न 4) मञ्जूषातः उचित-हिन्दी-पदानि चित्वा रिक्तस्थानानि पूरयत -

¼ X 06 = 03

तुम सब, मेरा, वह, हम दोनों का, वे सब, हमारा

क) सा _____ । ख) तानि _____ ।

ग) अस्माकम् _____ । घ) यूयम् _____ ।

ङ) आवाम् _____ । च) मम _____ ।

प्रश्न 5. उचित-क्रियापदैः वाक्यानि पूरयत -

पठसि, धावामः, गच्छावः, क्रीडथः, लिखामि, पश्यथ

¼ X 6 = 03

क. त्वं _____ ख. आवां _____ ग. यूयम् _____

घ. अहं _____ ङ. युवां _____ च. वयं _____

प्रश्न 6. मञ्जूषातः पदानि चित्वा रिक्तस्थानानि पूरयत -

¼ X 4 = 2

क. कन्याकुमारी त्रयाणां सागराणां _____ भवति ।

ख. भारतदेशः _____ इति कथ्यते ।

ग. जनाः समुद्रतटं _____ आगच्छन्ति ।

घ. बालेभ्यः _____ रोचते ।

प्रश्न 7. यथायोग्यं योजयत -

अ

ब

¼ X 4 = 2

क) समुद्रतटः - पोषणाय _____

ख) क्रीडनकम् - प्रकाशाय _____

ग) दुग्धम् - पर्यटनाय _____

घ) दीपकः - खेलनाय _____

— 1/2 —

प्रश्न 8. संख्यानां कृते उचितसंस्कृतपदं मञ्जूषातः चित्वा लिखत - सप्त, द्वौ, पञ्च, एकः, दश, चत्वारः, अष्ट $\frac{1}{2} \times 6 = 03$

क) 02. _____ ख) 1. _____ ग) 07. _____
घ) 04. _____ ङ) 10 _____ च) 08 _____

प्रश्न 9. हिन्दीभाषातः संस्कृतभाषायाम् अनुवादत- (हिन्दी भाषा से संस्कृत भाषा में अनुवाद करें - कोई - 4) $1 \times 4 = 04$

क) मैं पढ़ता हूँ। _____ घ) वह लिखता है। _____
ख) तुम दो खेलते हो। _____ ङ) दीपक खाता है। _____
ग) वे सब चलते हैं। _____ च) हम दोनों हैंसते हैं। _____

प्रश्न 10. अव्ययानाम् अर्थं मञ्जूषातः चित्वा लिखत - $\frac{1}{2} \times 6 = 3$

क) अत्र _____ ख) प्रातः _____
ग) च _____ घ) कुत्र _____
ङ) तत्र _____ च) सर्वत्र _____

सब जगह, कहीं,
और, वहाँ, सुबह, यहाँ

प्रश्न 11. उचित - धातुरुपैः रिक्तस्थानानि पूरयत - $\frac{1}{2} \times 12 = 6$

पुरुषः	एकवचनम्	द्विवचनम्	बहुवचनम्
प्रथमपुरुषः	पठति	_____	पठन्ति
मध्यमपुरुषः	_____	खेलथः	खेलथ
उत्तमपुरुषः	खादामि	_____	_____
प्रथमपुरुषः	धावति	धावतः	_____
मध्यमपुरुषः	लिखसि	_____	लिखथ
उत्तमपुरुषः	_____	धावावः	_____
प्रथमपुरुषः	_____	चलतः	चलन्ति
मध्यमपुरुषः	चलसि	_____	_____
उत्तमपुरुषः	_____	हसावः	हसामः

प्रश्न 12. उचित - शब्दरूपैः रिक्तस्थानानि पूरयत - $\frac{1}{2} \times 12 = 06$

विभक्तिः	एकवचनम्	द्विवचनम्	बहुवचनम्
प्रथमाविभक्तिः	लता	_____	लताः
द्वितीयाविभक्तिः	_____	बालिके	_____
तृतीयाविभक्तिः	रामेण	_____	_____
चतुर्थीविभक्तिः	_____	बालकाभ्याम्	_____
पंचमीविभक्तिः	बालकात्	_____	बालकेभ्यः
षष्ठीविभक्तिः	फलस्य	_____	फलानाम्
सप्तमीविभक्तिः	_____	पुष्पयोः	_____
संबोधनम्	हे राम !	हे _____ !	हे रामाः !



दिल्ली पब्लिक स्कूल, भिलाई
अर्धवार्षिक परीक्षा – 2019

दिनांक : 13 सितंबर, 2019

विषय – हिन्दी

पूर्णांक : 80

कक्षा : छठवीं

समय : 3 घंटा

निर्देश :

- (क) प्रश्नों के सभी उपभागों के उत्तर क्रमशः लिखिए ।
(ख) वर्तनी की शुद्धता एवं प्रभावशाली भाषा अपेक्षित है।
(ग) प्रत्येक प्रश्न – पत्र के सामने निर्धारित अंक दिए गए हैं।
(घ) इस प्रश्न-पत्र में प्रश्नों की कुल संख्या 9 हैं और मुद्रित पृष्ठों की संख्या 2 है।

प्रश्न 01. निम्नलिखित गद्यांश को ध्यानपूर्वक पढ़कर उसके नीचे लिखे प्रश्नों के उत्तर दीजिए –

एक बार देवताओं और दानवों में इस बात को लेकर झगड़ा प्रारंभ हो गया कि स्वर्ग पर किसका अधिकार हो। इस बात को लेकर युद्ध तक की नौबत आ गई। तभी नारद जी वहाँ आ गए और उनसे लड़ाई का कारण पूछा। दानवों ने उन्हें बताया कि हम भी देवताओं के भाई हैं इसलिए स्वर्ग पर हमारा भी अधिकार है। इसलिए हम चाहते हैं कि स्वर्ग का आधा राज्य हमें दे दिया जाए। यह बात सुनकर नारद जी चकराए। वे बोले, "इस बात का निर्णय विष्णु जी ही कर सकते हैं। आओ उनके पास चलें।" देवता और दानव नारद के साथ विष्णु जी के पास गए और अपनी-अपनी बात कही।

विष्णु जी बोले, "स्वर्ग पर किसका अधिकार हो, इसका निर्णय एक प्रतियोगिता के आधार पर किया जाएगा।" वे आगे बोले, "कल तुम दोनों में भोजन करने की एक प्रतियोगिता होगी। उसमें जो जीतेगा, स्वर्ग पर उसी का अधिकार होगा।" अगले दिन विष्णु जी ने दोनों को खाने पर बुलाया, उन्होंने दोनों के हाथों में लकड़ी की बड़ी-बड़ी खपच्चियाँ बाँध दीं। वे बोले – "अब खाना प्रारंभ करो। पर ध्यान रहे खाता खाते समय किसी का भी हाथ मुड़ना नहीं चाहिए।" दानव बिना हाथ मोड़े भोजन नहीं कर पाए जबकि देवताओं ने स्वयं खाने के बजाए बिना हाथ मोड़े एक-दूसरे को खिलाना शुरू कर दिया। विष्णु जी ने निर्णय दिया, "दानवों में आपसी सहयोग नहीं है जबकि देवताओं ने आपसी सहयोग करके एक दूसरे को भोजन करवाया। इसलिए स्वर्ग पर उन्हीं का शासन रहेगा।" दानव लज्जित हुए।

- (i) देवता और दानव किस बात पर झगड़ रहे थे ? (01)
(ii) नारद जी झगड़े का निर्णय करवाने के लिए उन्हें कहाँ ले गए ? (01)
(iii) विष्णु जी ने देवताओं और दानवों के हाथों में क्या बाँधा ? (01)
(iv) विष्णु जी ने खाना खाने के लिए कौन-सी शर्त रखी ? (01)
(v) विष्णु जी ने देवताओं के पक्ष में निर्णय क्यों दिया ? (01)

प्रश्न 02. प्रधानाचार्य को उचित कारण बताते हुए अवकाश के लिए पत्र लिखिए।

अथवा (OR)

अपनी पढाई की जानकारी देते हुए माता-पिता को पत्र लिखिए।

प्रश्न 03. निम्नलिखित में से किसी एक विषय पर 100 शब्दों में अनुच्छेद लेखन कीजिए :-

- (क) मीठी वाणी बोलिए (ख) स्वदेश प्रेम
(ग) पूर्णिमा का चोंद (घ) जैसे ही मैं घर से निकला, वर्षा होने लगी

- प्रश्न 04. (i) वर्ण किसे कहते हैं ? परिभाषा लिखिए। (01)
(ii) हिन्दी की लिपि क्या है ? (01)
(iii) भाषा के कितने रूप होते हैं ? (01)
(iv) व्याकरण पढ़ने की क्या उपयोगिता है ? (01)
(v) व्याकरण भाषा के कितने अंगों पर विचार करता है ? (01)
(vi) निम्नलिखित में से किसका प्रयोग मौखिक भाषा द्वारा होता है ? – पत्र, बातचीत, निबंध (01)
(vii) हिन्दी वर्णमाला में स्वरों की संख्या कितनी है ? (01)
(viii) संज्ञा की परिभाषा लिखिए। (01)
(ix) जो शब्द किसी वर्ग या जाति के सभी पदार्थों, वस्तुओं या प्राणियों के नाम का बोध कराएँ, उन्हें कौन-सी संज्ञा कहते हैं ? (01)
(x) संज्ञा के भेद बताइए – भारत, बीमारियाँ (01)
(xi) संज्ञा में किन तीन कारणों से विकार आ जाता है ? (01)
(xii) सभी हिन्दी महीनों तथा दिनों के नाम किस लिंग में होते हैं ? (01)
(xiii) नित्य एकवचन शब्द छोटिए – ऑसू, दर्शन, वर्षा (01)
(xiv) अपादान कारक का एक उदाहरण लिखिए। (01)
(xv) बहुवचन रूप लिखिए – नेता, जलेबी (01)
(xvi) अरे बच्चों! इधर आओ। (रेखांकित शब्द किस कारक में है ?) (01)

Contd...2

- (xvii) 'प्रेम' का विलोम शब्द लिखिए। (01)
- (xviii) हमें सदैव आशा रखनी चाहिए,से बचना चाहिए। (रिखांकित शब्द का विलोम लिखिए।) (01)
- (xix) 'अग्नि', 'पापक', 'अनल' किस शब्द के पर्यायवाची हैं? (01)
- (xx) "आँख" शब्द के दो पर्यायवाची लिखिए। (01)
- (xxi) 'भुरसरि', 'भागीरथी', 'मंदाकिनी' किस शब्द के पर्याय हैं? (01)
- (xxii) 'आँखों में धूल झोंकना' मुहावरे का अर्थ लिखिए। (01)
- (xxiii) मुहावरे का वाक्य प्रयोग कीजिए - 'ईट का जवाब पत्थर से देना' (01)
- (xxiv) 'बुरी तरह हराना' किस मुहावरे का अर्थ है? (01)
- (xxv) मैंने मीरा को चिट्ठी भेजी। (रिखांकित शब्द किस कारक में है?) (01)
- प्रश्न 05.** निम्नलिखित प्रश्नों में से किन्हीं पाँच प्रश्नों के उत्तर लगभग 50-60 शब्दों में दीजिए :- (5x4=20)
- (i) 'वह चिड़िया जो' कविता के आधार पर बताइए कि चिड़िया को किन-किन चीजों से प्यार है?
- (ii) 'तुम्हें बताऊँगी कि हमारे समय और तुम्हारे समय में कितनी दूरी हो चुकी है।'- इस बात के लिए लेखिका क्या-क्या उदाहरण देती है?
- (iii) अंडों के बारे में केशव और श्यामा के मन में किस तरह के सवाल उठते थे? वे आपस ही में सवाल-जवाब करके अपने दिल को तसल्ली क्यों दे दिया करते थे?
- (iv) अक्षरों के ज्ञान से पहले मनुष्य अपनी बात को दूर-दराज के इलाकों तक पहुँचाने के लिए किन-किन माध्यमों का सहारा लेता था?
- (v) कंट्रोल रूम में जाकर छोटू ने क्या देखा और वहाँ उसने क्या हरकत की?
- (vi) अक्षरों की खोज का सिलसिला कब और कैसे शुरू हुआ?
- (vii) केशव और श्यामा ने चिड़िया के अंडों की रक्षा की या नादानी? अपने उत्तर के समर्थन में उचित तर्क प्रस्तुत कीजिए।
- प्रश्न 06.** नीचे लिखे गद्यांश को ध्यानपूर्वक पढ़कर प्रश्नों के उत्तर दीजिए -
- छोटू के पापा सोच में डूब गए। क्या सचमुच अंतरिक्ष यान होगा? कहाँ से आ रहा होगा? सौरमंडल में हमारी धरती के अलावा और कौन से ग्रह पर जीवों का अस्तित्व होगा? कैसे हो सकता है? और अगर होगा भी तो क्या इतनी प्रगति कर चुका होगा कि अंतरिक्ष यान छोड़ सके? ...वैसे तो हमारे पूर्वजों ने भी अंतरिक्ष यानों, उपग्रहों का प्रयोग किया था। मगर अब हमारे लिए यह असंभव है।
- (क) प्रस्तुत गद्यांश किस पाठ से लिया गया है? इस पाठ के लेखक कौन हैं? (02)
- (ख) छोटू के पापा किस सोच में डूब गए थे? (02)
- (ग) क्या हमारे पूर्वजों ने अंतरिक्ष यानों और उपग्रहों का प्रयोग किया था? (01)
- प्रश्न 07.** नीचे लिखे काव्यांश को पढ़िए और उनके नीचे दिए गए प्रश्नों के उत्तर दीजिए -
- वह चिड़िया जो -
चोंच मारकर
दूध-भरे जुंड़ी के दाने
रूचि से, रस से खा लेती है
वह छोटी संतोषी चिड़िया
नीले पंखों वाली मैं हूँ
मुझे अन्न से बहुत प्यार है।
- (क) उपर्युक्त काव्यांश के कवि और कविता का नाम बताइए। (02)
- (ख) चिड़िया किस प्रकार के दानों को कैसे खाती है? (02)
- (ग) चिड़िया का स्वभाव कैसा है? (01)
- प्रश्न 08.** एक वाक्य में उत्तर दीजिए -
- (i) 'नादान दोस्त' पाठ के लेखक का नाम बताइए। (01)
- (ii) 'बचपन' पाठ गद्य की कौन सी विधा है? (01)
- (iii) 'प्रागैतिहासिक काल' किसे कहते हैं? (01)
- (iv) उपसर्गों को अलग करके मूल शब्द लिखिए - (01)
- अदृश्य, अनुचित
- (v) क्या होता अगर हमारे पास अक्षर न होते? (01)
- (vi) 'वार्तालाप' किन दो शब्दों के योग से बना है? (01)
- (vii) मंगल की धरती पर उतरा हुआ अंतरिक्ष यान का नाम क्या था? (01)
- प्रश्न 09.** "अनुमान और कल्पना" पर आधारित निम्नलिखित प्रश्नों में से किसी एक प्रश्न का उत्तर 40-50 शब्दों में लिखिए। (03)
- (i) पुराने जमाने में लोग यह क्यों सोचते थे कि अक्षर और भाषा की खोज ईश्वर ने की थी?
- (ii) अपने बचपन की कोई मनमोहक घटना याद करके लिखिए।



DELHI PUBLIC SCHOOL, BHILAI

Date : 09.09.2019

FIRST-TERM EXAMINATION, 2019

Time : 3 Hrs.

Class - VI

SUBJECT – SOCIAL SCIENCE

M.M. 80

GENERAL INSTRUCTIONS :

- There are 31 questions. All are compulsory.
- Question No. 1 to 14 are very short answer questions of 1 marks each.
- Question No. 15 to 26 are short answer questions of 3 marks each.
- Question No. 27 to 30 are long answers questions of 5 marks each.
- Question No. 31 is (a) map based question. Tie your map inside your main script.
(b) Diagram.

- Q.01 What were the people who gathered their food called in ancient times? (01)
- Q.02 What are Manuscripts? (01)
- Q.03 Name the first animal to be tamed by the early man. (01)
- Q.04 Where was the Great bath discovered? (01)
- Q.05 Name the God of fire mentioned in Rigveda. (01)
- Q.06 What time does the earth take to complete its one revolution? (01)
- Q.07 Which colour is used for showing mountains on a map? (01)
- Q.08 Which planet is also known as 'Earth's twin'? (01)
- Q.09 Name the galaxy to which our solar system belongs to. (01)
- Q.10 Name the cold desert located in the eastern part of Jammu and Kashmir. (01)
- Q.11 Who is known as the father of Indian Constitution? (01)
- Q.12 Who composed our National Anthem? (01)
- Q.13 How many major religions are there in the world? (01)
- Q.14 What does the term suffrage mean? (01)
- Q.15 Name the sources to know history with suitable examples. (03)
- Q.16 Write any three uses of stone tools for early man. (03)
- Q.17 Give three probable reasons for the decline of Harappan Cities. (03)
- OR**
- In what ways are the books we read today different from the Rigveda?
- Q.18 Mention three distinctive features of Mehrgarh. (03)
- OR**
- In what ways the city of Dholavira was different from other Harappan Cities?
- Q.19 What do you mean by prejudice? Give two examples. (1+2=03)
- OR**
- What was suffrage movement? What did it accomplish?
- Q.20 Why do you think government needs to make rules for everyone in the form of laws? (03)
- Q.21 Do you think elections are required after a fixed period? Why? (03)
- Q.22 Write three dissimilarities between Kerala and Ladakh. (03)
- Q.23 What do you mean by Conventional Symbols? How do these symbols help in reading map? (1+2=03)
- Q.24 How does a planet differ from a star? (03)
- Q.25 Differentiate between Rotation and Revolution. (03)
- OR**
- How are maps useful than a globe?
- Q.26 What is the latitudinal value of the Tropic of Cancer? What are parallels of latitude and Meridians of longitude? (1+2=03)
- Q.27 Why did hunter-gatherers travel from place to place? (05)
- OR**
- Explain the house pattern and drainage system of the Harappan cities.

Contd...2

Q.28 Write five special features of Harappan cities.

OR

(05)

What is History? Why were metals, writings, the wheel and the plough important for the Harappans?

Q.29 What is equinox? Differentiate between Summer Solstice and Winter Solstice.

(2+3=05)

OR

What are the three components of map? Distinguish between a Map and a Plan.

(3+2=05)

Q.30 Name two essential features of a democratic government. Distinguish between Democracy and Monarchy.

(2+3=05)

OR

What do you understand by the word 'government'? List any four ways in which you think the government affects our daily life?

(1+4=05)

Q.31 (a) Locate the following places on the give map of India. (any 5)

(1x5=05)

(a) Burzahom (b) Bhimbetka (c) Inamgaon (d) Adichanallur (e) Daojali Hading (d) Hallur

(b) Draw a neat and labelled diagram of Important latitudes and Heat Zones of the Earth.

(05)





DELHI PUBLIC SCHOOL, BHILAI

Date : 16.09.2019
Class - VI

FIRST TERM EXAMINATION, 2019
SUBJECT – SCIENCE

Time : 3 Hrs.
M.M. 80

GENERAL INSTRUCTIONS :

- Question No. 1 to 6 carry 1 mark each.
- Question No. 7 to 15 carry 2 marks each.
- Question No. 16 to 27 carry 3 marks each.
- Question No. 28 to 31 carry 5 marks each.

- Q.01** Name two edible parts of Pumpkin plant. (01)
- Q.02** Name two unstitched piece of fabric used by people till today. (01)
- Q.03** List two gases which are soluble in water. (01)
- Q.04** What are translucent objects? (01)
- Q.05** A drawing sheet changes when you draw a picture on it. Can you reverse this change? (01)
- Q.06** If a plant has fibrous root, what type of venation does its leaves have ? (01)
- Q.07** Name four ingredients used to make dal. (02)
- Q.08** State the functions of vitamins & proteins in our diet. (02)
- Q.09** Define (i) Ginning (ii) Spinning (02)
- Q.10** Name the plant part from which cotton & jute are obtained. (02)
- Q.11** Find the odd one out from the following & give reason for your choice. (02)
- (a) Iron, Sand, Copper, Aluminium, Silver (b) Sugar, Salt, Oil, Copper Sulphate
- Q.12** What is threshing? How is it done? (02)
- OR**
- How can we separate the following: (Name the process)
- (a) Salt Water (b) Sand & Stones (c) Tea leaves from tea (d) Dust or Soil particles from Rice
- Q.13** How does a blacksmith change a piece of iron into different tools? (02)
- OR**
- What are the changes that occur in the incense stick when it is burnt? Is it a reversible change?
- Q.14** What are reversible & irreversible changes? (02)
- Q.15** What is sieving? Where is it used? (02)
- OR**
- What is winnowing? Where is it used? (02)
- Q.16** (a) Name two food items obtained from animals. (03)
- (b) What are carnivores? Give two examples.
- Q.17** How will you test the presence of proteins in the given food sample? (activity form) (03)
- OR**
- How will you test the presence of starch in the given food sample. (activity form)
- Q.18** How can we prepare sprouted moong or chana? (03)
- Q.19** (a) Name two items that are made from coconut fibres. (03)
- (b) How is fibre made from jute plant?
- Q.20** (a) State the role of roughage in our diet. (03)
- (b) Define (i) Balanced diet (ii) Deficiency diseases.
- OR**
- Name the diseases caused by the deficiency of following nutrients in our diet.
- (a) Iron (b) Iodine (c) Vitamin B1 (d) Vitamin C (e) Vitamin A (f) Calcium
- Q.21** What are natural & synthetic fibres? Give two examples each. (03)
- Q.22** (a) Why do metals lose their shine & appear dull? (03)
- (b) Why do we need to group materials? (any two points)
- Q.23** (a) What is a saturated solution? (03)
- (b) How will you separate sand & salt?

Contd...2

- Q.24** State whether the following changes are reversible or irreversible. **(03)**
(a) Melting of ice (b) Cooking of food (c) Souring of milk
(d) Bursting of balloon (e) Dissolving salt into water (f) Making paper boat
- Q.25** How is the iron rim fixed on a wooden wheel of a cart? What kind of change is it? **(03)**
- Q.26** Draw a section of a flower & label four different parts. **(03)**
- Q.27** What is parallel & reticulate venation? Give two examples in each case. **(03)**
- Q.28 (a)** What happens if a person does not get enough proteins in his/her diet for a long time?
(b) State the functions of carbohydrates, fats & minerals.
OR **(05)**
- (a)** What happens if a person does not get enough carbohydrates & proteins in his/her diet for a long time?
(b) Name two sources of each of the following :
(i) Proteins (ii) Iodine (iii) Vitamin C
- Q.29 (a)** Draw a leaf & label any four parts?
(b) Write an activity to show that stem conducts water.
OR **(05)**
- (a)** Write any two differences between a shrub & a tree?
(b) Draw neatly labelled diagrams of tap & fibrous roots.
- Q.30 (a)** How are materials grouped?
(b) Define transparent & opaque objects. Give two examples each.
OR **(05)**
- Describe an activity to show that leaves prepare food in the presence of sunlight.
Draw necessary diagram.
- Q.31 (a)** How will you obtain pure water from a sample of muddy water? (activity form)
(b) Draw an experimental set up for this activity.
OR **(05)**
- (a)** List any two functions of leaves.
(b) Define evaporation & condensation.
(c) How will you separate a mixture of grass, pebbles & sand?





DELHI PUBLIC SCHOOL, BHILAI

Date : 18.09.2019

FIRST-TERM EXAMINATION, 2019

Time : 3 Hrs.

Class - VI

SUBJECT – ENGLISH

M.M. 80

GENERAL INSTRUCTIONS

- Attempt all the questions in each section before going to the next section in the same order.
- All the answers must be correctly numbered and neatly written down.
- Do not copy the questions.
- The paper consist of 4 sections:

Section A - Reading: 16 Marks
Section C - Grammar: 16 Marks

Section B - Writing : 18 Marks
Section D - Literature : 30 Marks

SECTION A : READING (16 Marks)

A.1 Read the following passage carefully and answer the questions that follow: (8 Marks)

1. The grapes are one of the most expensive fruits; in fact in the USA they are the most valued fruit crop. Grapes have been cultivated since Biblical times. But, it was only 300 years ago that the Spaniards introduced the Americans to them. Today, 25 million acres of land on Earth is dedicated to cultivating grapes yielding 72 million tonnes. Nasik in Maharashtra is one of the leading grape producers in India.
2. Grapes grow on vines in clusters of varying sizes, from as few as 6 in a bunch to as many as 300. They come in a variety of colours : red, black, green, purple, brown, golden, peach or white; they may be seeded or seedless. They can be eaten raw, plucked straight off the crawling vines, or dried into raisins or be processed into jams, jellies and juices. Besides the fruit, the leaves of the grape vines too are edible. For instance, in Turkey, vegetables are stuffed and rolled inside these leaves and cooked. The red variety is effective against heart diseases, cancer, nerve diseases and other ailments.
3. The dried grape is known as raisin. It is used as garnish in sweet dishes. Today , while ovens may also be used to dry grapes, in many places the traditional practice of drying them in the sun is still prevalent. Sultanas, currants, and other raisins of various colours and sizes are produced in different parts of the world. Since 60% of the weight of the raisin is sugar, it is perfect when you need a quick boost of energy.
4. Raisins have been known to man since ancient times and find a mention in the Old Testament. They were used as decorations, offered in worship, awarded to winners in competitions and even served as currency. During the Middle Ages, physicians prescribed raisins for almost every disease.

Answer the following questions:

- a. Who introduced grapes to the Americans? (1)
- b. Name the place that leads in the production of grapes in India. (1)
- c. What are the different colours and varieties of grapes? (1)
- d. Mention at least two ways in which grapes can be eaten ? (1)
- e. What are the uses of red grapes? (1)
- f. How do the raisins provide a quick boost of energy ? (1)
- g. Find out a word that is opposite in meaning of the word 'cheap'. (Para-1) (1)
- h. Find a word from the passage that is synonym of 'eatable'. (Para-2) (1)

A.2 Read the poem and answer the questions that follow: (8 Marks)

Fancy Being Frightened of Me!

1. I'm a little white mouse—now don't run away,
It really is puzzling, you see,
That some ladies faint, or scream, or jump
On a chair, at the sight of me!
2. I was travelling in young master's pocket, one day,
Both having a ride in a bus—
When suddenly thought I'd take a look round,
But oh! What a bother and fuss!
3. From a gentleman's hat, to a basket I jumped,
Then on to a school boy's cap—
I scurried along a lady's muff,
While she was taking a nap!

Contd...2

4. Oh, how they all jumped, and so did I—
They made me nervous, they did!
Raising their voices, Oh dear! Oh dear!
So back in that pocket, I hid!
5. As well, folk are odd, that's all I can say,
And other mice, too, will agree—
Just fancy that people can get so scared
At something, as small as me!

---By Porter G.

Answer the following:

- (a) Who is 'I' in the above poem? (1)
(b) Why was he puzzled? (1)
(c) What was he doing in young master's pocket? (1)
(d) What did he do after coming out of his master's pocket? (1)
(e) Why was he nervous? (1)
(f) Where did he hide at last? (1)
(g) Find out an antonym word for 'confident'? (Stanza -4) (1)
(h) Find a word from the poem that means 'frightened'. (Stanza-5) (1)

SECTION B : WRITING (18 Marks)

B.1 Aparna had the following conversation with her sister Venu's dance teacher, Mrs. Jaspreet. Since Aparna was going to the market soon afterwards, she leaves a message for Venu.

Read the conversation below and write message in about 50 words.

Mrs. Jaspreet : Hello, this is Mrs. Jaspreet speaking. May I please speak to Venu?

Aparna : I am afraid Mrs. Jaspreet, Venu has just left for the library.

Mrs. Jaspreet : When is she likely to come back?

Aparna : In about 2 hours. Could I give her a message?

Mrs. Jaspreet : Yes please. Could you tell her that there won't be a dance class today, but there will be a class tomorrow at 5.30 pm. She should bring extra tiffin with her, as the class will be for 2 hours. Will you kindly convey the message to her?

Aparna : Yes I will. (5)

B.2 Draft an advertisement for the sale of your old refrigerator. (5)

B.3 Yesterday it was the first day in your new school. You made new friends. Teachers were good to you and you liked the infrastructure of the school. Write a diary entry in about 100-120 words expressing your experiences and feelings about the new school. (8)

Include the points given below:

- Joined new school—very nice and exciting
- Class teacher introduced—entire class
- Sat with the class monitor—she helped—with class work
- Best thing—library—big and spacious—found books—my favourite authors
- Computer lab—well equipped—latest models of computers
- Mention how much you miss old friends

OR

Write a short paragraph in about 100-120 words describing your favourite book. Include the following points:

- Title of the book—name of the author/publisher
- Type (fiction/poetry/religion/thriller/suspense, etc.)
- Content quality
- What was the best part in it?
- Why you like it?

SECTION C : GRAMMAR (16 Marks)

For questions C.1 to C.4 choose the most appropriate answer from the given options:

C.1 Fill in the blanks with appropriate modals and write (2)

- (a) _____ you always be healthy and happy!
(i) ought to (ii) may (iii) should (iv) couldn't
- (b) Namita, _____ I use your marker for a little while?
(i) can (ii) must (iii) would (iv) might

C.2 Fill in the blanks with suitable collective nouns: (2)

- (a) They saw a _____ of lions at the zoo.
(i) flock (ii) pride (iii) herd (iv) pack
- (b) A number of directors of a company is known as _____ of directors.
(i) horde (ii) mob (iii) board (iv) bevy

- C.3 Complete the sentences with appropriate use of articles:** (2)
- (a) Twelve inches make _____ foot.
(i) a (ii) an (iii) the (iv) no article
- (b) This road is known as _____ Queen's necklace.
(i) an (ii) a (iii) the (iv) all of these
- C.4 Identify the type of Underlined Adjective in the following sentences:** (2)
- (a) Abdul won the second prize.
(i) demonstrative (ii) possessive (iii) quantity (iv) number
- (b) The foolish donkey tried to sing.
(i) interrogative (ii) quality (iii) distributive (iv) possessive
- C.5 Fill in the blanks with correct form of verb as indicated in the brackets:** (2)
- (a) My mother _____ (bake) cookies when the door bell rang. (Past Continuous)
- (b) The Earth _____ (rotate) around its own axis. (Simple present)
- C.6 Identify the subject and predicate in the following sentences:** (2)
- (a) A green grocer sells vegetables.
- (b) A girl child and her mother were injured in the car crash.
- C.7 Fill in the blanks with suitable reflexive pronoun:** (2)
- (a) They went to the party _____.
- (b) She painted the picture _____.
- C.8 Underline the verb and state whether it is Transitive or Intransitive verb:** (2)
- (a) My teacher explained the lesson.
- (b) The candle burnt brightly.

SECTION D : LITERATURE (30 Marks)

- D.1 Read the following extracts and answer the questions that follow:** (3x3=9)
- (I) 'How bright on the blue
Is a kite when it's new!
With a dive and dip
It snaps its tail.
Then soars like a ship.
- (a) How does the poet describe the beauty of the kite? (1)
- (b) What does the kite do in the sky? (1)
- (c) What is the kite compared to? (1)
- (II) 'Let us drown him in this waterfall.'
- (a) Who said the above line? (1)
- (b) Who does 'him' refer to? (1)
- (c) Why did they want to drown him in the waterfall? (1)
- (III) 'Beauty is heard
In the night
Wind sighing, rain falling,
Or a singer chanting.'
- (a) Name the poem and the poet? (1)
- (b) Where is beauty heard? (2)
- D.2 Answer any three of the following questions in about 30-40 words each:** (2x3=6)
- (a) In what subjects did the little man need help, to do Patrick's homework?
- (b) According to the poet, what is the difference between a house and a home?
- (c) Why did Taro run in the direction of the stream?
- (d) Explain the line from the poem—'Quarrel'—'thumped me on the back.'
- D.3 Answer any one of the following questions in about 75-80 words:** (5)
- (a) Describe Kalpana Chawla's first mission in space.
- OR
- Who did the dog first choose as his master? Why did he leave that master?
- D.4 Answer any three of the following questions in about 30-40 words each:** (2x3=6)
- (a) How did Abdullah of the land meet Abdullah of the sea?
- (b) What was vizier afraid of?
- (c) How were the children taught at the school?
- (d) What did Abdullah of the sea request Abdullah of the land?
- D.5 Answer any one of the following questions in about 75-80 words:** (4)
- (a) Describe how the schoolmaster read the letter. What according to him should the woman do knowing the contents of the letter?

OR

What advice did the ass give to the ox? What was the result?

sssskkkk



DELHI PUBLIC SCHOOL, BHILAI

Date : 11.09.2019

FIRST-TERM EXAMINATION, 2019

Time : 3 Hrs.

Class - VI

SUBJECT – MATHEMATICS

M.M. 80

General Instructions :

- All the questions are compulsory.
- The question paper consists of 30 questions divided into 4 sections. A, B, C and D.
 - Section 'A' comprises of 6 questions of 1 mark each.
 - Section 'B' comprises of 6 questions of 2 marks each.
 - Section 'C' comprises of 10 questions of 3 marks each.
 - Section 'D' comprises of 8 questions of 4 marks each.
- An internal choice has been provided into two questions of 1 mark each, two questions of 2 marks each, four questions of 3 marks each and three questions of 4 marks each.

SECTION : A

Choose the correct option :

(1x6=06)

- Q.01 Least whole number is :
(a) 1 (b) 2 (c) 3 (d) 0
- Q.02 $8 \div 0$ is
(a) 7 (b) 0 (c) 8 (d) impossible to divide
- Q.03 The H.C.F. of 128 and 144 is :
(a) 4 (b) 8 (c) 16 (d) 32
- OR
- L.C.M. of co-primes 8, 21 is
(a) 8×21 (b) 8×7 (c) 21×4 (d) 14×3
- Q.04 $2\frac{1}{3} \div 2\frac{1}{3}$ is
(a) 0 (b) $\frac{7}{3}$ (c) 1 (d) $\frac{3}{7}$
- Q.05 The complement of an angle of 75° is :
(a) 20° (b) 105° (c) 125° (d) 15°
- Q.06 The sum of three angles of a triangle is :
(a) 120° (b) 200° (c) 160° (d) 180°

OR

- If one angle of a triangle is 110° , then it is called :
(a) Obtuse (b) acute (c) right (d) reflex

SECTION : B

(2x6=12)

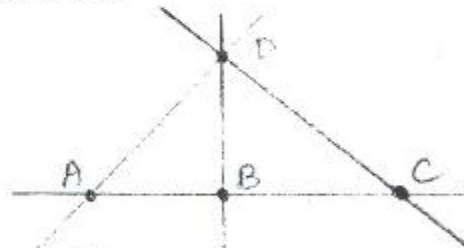
- Q.07 How many lakhs make a million?
- Q.08 Divide by repeated subtraction : $100 \div 25$
- Q.09 Find the H.C.F. by prime factorization : 21, 106

OR

Show that 35, 22 are co-primes.

Q.10 Find n : $\frac{2}{7} \times n = 14$

Q.11 In the given figure, name



- (a) Three collinear points
(b) Three concurrent lines

Q.12 Two angles of a triangle are 70° and 30° , find the 3rd angle.

OR

Is it possible for a triangle with sides 8 cm, 5 cm, 3 cm.

Contd...2

SECTION : C

(2x6=12)

Q.13 Draw the number line and illustrate the statement : $2+4=6$

OR

Find the difference in the face value and place value of 5 in 1205341.

Q.14 Divide by division algorithm and verify by multiplication : $4732 \div 102$

OR

Simplify : $826 \times (10-10)$

Q.15 Find the L.C.M. : 30, 48, 120

OR

The product of two numbers is 20736. Their H.C.F. is 24. Find their LCM.

Q.16 Find n such that $n + 3\frac{1}{2} = 5\frac{3}{4}$

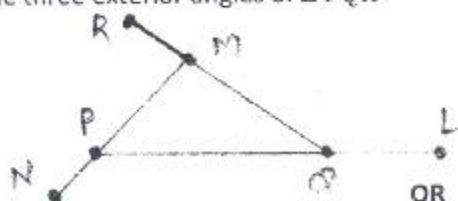
Q.17 Construct line segments AB and CD of lengths 2.5 cm and 4.7 cm respectively.

Q.18 Name the solids which have—(i) Only flat surfaces (ii) Only curved surface (iii) Both curved and flat surfaces.

Q.19 Through how many degrees does the hour hand turn in 2 hours?

Q.20 How many degrees are there in (a) right angle (b) straight angle (c) complete angle

Q.21 Name the three exterior angles of ΔPQR



Draw a triangle and measure its sides and verify that the sum of any two sides is greater than the third.

Q.22 In a ΔABC , $\angle A = 60^\circ$, $\angle B = 90^\circ$, find $\angle C$ and exterior angle at A.

SECTION : D

(4x8=32)

Q.23 Write down the number –names of :

(a) 34,705

(b) 9,23,075

Q.24 Simplify :

$$\frac{(2 \times 4) + 6}{7} + [(16 \times 1) - 3]$$

OR

$$[(18 \times 2) \div 4] + \frac{(3 \times 2) - 4}{2}$$

Q.25 Find the greatest number less than 10,000 which is extra divisible by 48, 60 and 64.

Q.26 Three bells tolls at intervals of 9, 12 and 15 minutes. If they start tolling together after what time will they toll together again?

OR

What is the least number which when decreased by 5 is exactly divisible by 36, 48, 21 and 28?

Q.27 $\frac{1}{5}$ of the journey was done by car and $\frac{3}{5}$ of the journey on motorbike. What fraction of the journey still remains?

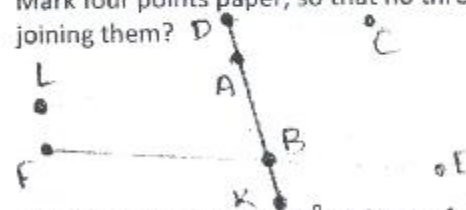
OR

From a sheet of tin $4\frac{3}{4}m$ long, two lengths were cut, one $2\frac{1}{2}m$ long and the other $1\frac{1}{3}m$ long.

How much of the sheet was left ?

Q.28 Mark four points paper, so that no three of them are collinear. How many lines can be drawn by joining them?

Q.29



(a) Name a pair of vertically opposite angles of A.

(b) Name a pair of adjacent angles at B.

(c) Name a linear pair at A.

(d) Name a pair of supplementary angles at B.

Q.30 If an exterior angle is 130° and one of the remote, interior angles is 70° , find the remaining angles of the ΔABC .

