



.....
GENERAL INSTRUCTIONS:


- Read the instructions carefully before answering the questions.
 - Attempt all the questions in each section before going to the next section.
 - All the answers must be correctly numbered and written neatly.
 - Do not copy the questions.
 - For multiple choice questions, option numbers should clearly be specified along with the answers.
 - The paper consists of 4 sections
Section A - Reading: 16 marks
Section B - Writing: 18 marks
Section C - Grammar: 16 marks
Section D - Literature: 30 marks.
-

SECTION - A : READING (16 MARKS)

A.1. Read the following passage carefully and answer the questions that follow:

8 Marks

1. I was the eldest child of a government employee with four siblings. My earliest memory of my father is that of a forest officer in Bhanupratapur, Madhya Pradesh. It was and still remains the most cherished memory. There was no electricity, no primary school nearby, no hospital, and no transport facility. As a result, I did not go to school until the age of seven; I was homeschooled. My father used to get transferred every alternate year. The family belongings fit into the back of a jeep, so the family moved from place to place; without any trouble, my mother would set up an establishment and get us going. My parents set the foundation of my life and the value system which make me what I am today and largely defines what success means to me.



2. My father had been given a vehicle by the Government. There was no garage in the office, so the jeep was parked in our house. My father refused to use it to commute to the office. He told us that the jeep was an expensive resource given by the government; it was not 'his jeep' but the government's. Insisting that he would use it only to tour the interiors, he would walk to his office on normal days. He also made sure that we sat in the jeep only when it was stationary. That was our early childhood lesson in governance, a lesson that corporate managers learn the hard way. Indeed, some never do.

3. Charan Singh, the jeep's driver was treated with the respect due to any other member of my father's office. As small children, we were taught not to call him by his name. We had to use the suffix 'Uncle' whenever we were to refer to him, in public or private. When I grew up to own a car and a driver by the name of Ramniwas was appointed, I repeated the lesson to my son. He has, as a result, grown up to call Ramniwas, 'Ram Uncle'- very different from many of his friends who refer to their family drivers as 'my driver'.

4. When I hear that term from a school-or-college-going person, I cringe. To me, the lesson was significant. You treat small people with more respect than big people. It is more important to respect your subordinates than your superiors.

5. At that time, my father's transfer order came. Mrs. Rastogi, our next door neighbour asked my mother why she was taking so much pain to beautify a government house. Why was she planting seeds that would only benefit the next occupant? My mother replied that it did not matter to her that she would not see the flowers in full bloom. She said, "I have to create bloom in a desert and whenever I am given a new place, I must leave it more beautiful than what I had inherited."

That was my first lesson in success. It is not about what you create for yourself, it is what you leave behind for others. Even today, this principle has ample significance in my life.

Contd... 2

- A1. a) Why was the author home schooled initially?
 b) Why is the author grateful to his parents?
 c) How can you say that the author's father was an honest man? Give any one example from the passage.
 d) In the passage, the author says - 'I repeated the lesson to my son'. Which lesson does he refer to?
 e) What did the author learn from his mother?
 f) How does the author feel when he hears any school or college going person calling the car drivers as 'drivers'?
 g) Find a word from the passage (para-1) which means the same as 'hold (something) dear-'
 (i) foundation (ii) cherished (iii) establishment (iv) alternate
 h) Find a word from the passage (para-5), which is the antonym of 'meagre-'
 (i) benefit (ii) significance (iii) inherited (iv) ample

A2. Read the poem carefully and answer the following questions:

8 Marks

1. There was a young man
 who lived below
 A mountain crowned
 with glaciers and snow,
 "Beautiful Mountain!"
 He used to say,
 "Only the clouds
 And the eagles know
 Their way to the place
 I intend to go.
2. The lofty peak
 You lift so high
 I've raved to climb
 Before I die."
 When he was a man
 He attempted it twice-
 Bravely be scaled
 Those shoulders of snow.
 And the arms of ice,
 But for all his courage
 The young man failed
 In his enterprise.
3. Then the mountain said
 In his awful voice
 of glacier and ice,
 "I am here alone,
 With the eagles and clouds,
 And forever alone,
 I intend to remain."
4. The young man replied,
 "I shall try it again."
 So he started out
 with all the gear
 That the people wear
 When they try to scale
 A mountain's crest,
 And believe it or not,
 He got to the top
 of Mount Everest.

- Mary Britton Miller

- a) Where did the young man live?
- b) What was the desire of the man?
- c) How many attempts did the man make in the beginning and was he successful?
- d) Pick out a pair of rhyming words from the last stanza.
- e) What happened in the end?
- f) What message does the poem convey?

Contd... 3

- g) According to the poem, which of the following sentence is true:
- The young man never succeeded in his mission.
 - Only the eagles and the clouds knew the way to the mountain.
 - The man lived on the top of a mountain.
 - The man tried thrice to climb the mountain.
- h) Pick out a word from the 3rd stanza which means the opposite of the word 'wonderful-'
- intend
 - forever
 - alone
 - awful

SECTION-B: WRITING (18 Marks)

- B.1.** You are Rohan / Rohini, the President of the Art Club of your School. Your school is organizing a Poster Making Competition during the activity period. The theme of the competition is 'Save Oil'. Write a notice in about 50 words for your school notice board giving all the necessary details. 5
- B.2.** Read the following conversation between Mohit and Ravi. Ravi is about to leave home, so he leaves a message for Atul. Write the message in about 50 words. 5
- Mohit: Hello, is it 624128079?
 Ravi: Yes, Ravi here.
 Mohit: I am Atul's friend, Mohit. I am calling from Shimla. Can I speak to him?
 Ravi: I am sorry, he is not here at the moment. He will return in an hour or so.
 Mohit: Can you convey a message to him?
 Ravi: Of course.
 Mohit: Please tell Atul that my mother will reach Mumbai today at about 7:45 p.m. by Mumbai Express. Ask him to receive her at the station. As she is not familiar with the place, please guide her to Hotel Fountain where a room has been booked for her. I will come tomorrow at 3 p.m.
 Ravi: OK. You needn't worry. I'll give him the message.
 Mohit: Thank you.

- B.3.** Your school is organising a tour to Rajasthan during the winter break Write a letter to your father for permission to join the educational tour. You are Neha/ Nitin of Boys / Girls Hostel, New Green Field School, Faridabad. Use the hints given below: (120 words) 8
- school-organising a tour to Rajasthan during winter break.
 - keen to join the tour- some of the friends have already received permission.
 - tour is planned to visit Jaipur, Ajmer, Bharatpur and Chittor.
 - group will consist of twenty five students and three teachers.
 - will be an interesting and instructive tour.

OR

Write a short story using the hints given below. Give a suitable title to it. (150 words)

Hints: A boy used to cry for new costly shoes - poor father - factory worker-meagre salary- couldn't afford - the boy cried a lot - left home saw a beggar at the bus stop - he had no legs - realization happened - thanked God for giving him two legs- realized the love and care of his parents.

SECTION - C: GRAMMAR (16 Marks)

- C.1.** Fill in the blanks with the correct verb forms: 2
- a. Gases _____ when heated.
 (i) expand (ii) has expanded (iii) expands (iv) are expanding
- b. I _____ off the television before I went to sleep.
 (i) have switched (ii) had switched (iii) switched (iv) switch
- C.2.** a) Fill in the blank with the most suitable non-finite verb in the following sentence: 2
 _____ along the road, he saw a lion.
 (i) Riding (ii) To ride (iii) Ridden (iv) Rode
- b) Fill in the blank with the most suitable modal in the following sentence:
 You often _____ wait for the metro.
 (i) must (ii) should (iii) may (iv) have to
- C.3.** a) Fill in the blank with the present continuous tense of the verb in bracket:
 A very fine breeze _____ outside. (blow)
 (i) was blowing (ii) are blowing (iii) is blowing (iv) has been blowing
- b) Fill in the blank with simple past tense form of the verb in bracket: 2
 As the temperature fell further, water _____ in the taps. (freeze)
 (i) freezed (ii) frozen (iii) froze (iv) freezes

Contd... 4

- C.4. Identify the kind of the underlined adverb in the following sentences: 2
- a) They handled the job enthusiastically.
 (i) Adverb of Purpose (ii) Adverb of Manner (iii) Adverb of Time (iv) Adverb of Place
- b) It's raining somewhere.
 (i) Adverb of Time (ii) Adverb of Degree (iii) Adverb of Frequency (iv) Adverb of Place
- C.5. Underline the adjectives in the following sentences and state their kinds: 2
- a) Many children like dinosaurs.
 b) Maharana Pratap was a brave warrior.
- C.6. Fill each blank with a suitable reflexive pronoun: 2
- a) We enjoyed _____ on the sea beach.
 b) Sumi saw _____ in the mirror.
- C.7. Change the following sentences into passive voice: 2
- a) The masons are building the house.
 b) The hunter shot the tiger.
- C.8. Write the meaning of the following idioms: 2
- a) black and white
 b) green fingers

SECTION-D: LITERATURE (30 Marks)

- D.1. Read the following extracts and answer the questions that follow: 3x3=9
- 1) 'Began to complain when he found that, at home,
 His cupboard was empty, and winter was come.'
 a) Who does 'he' refer to in the above lines?
 b) Why was his cupboard empty?
 c) Pick out a word from the above extract which is opposite of the word 'praise'.
- 2) But it was difficult to understand
 that the men on the earth found
 causes to hate each other, to build
 walls across cities and to kill.
 From that height, it was not clear why.
 a) What was 'difficult to understand' for the poet?
 b) Find a word from the above extract which means 'tough'.
 c) Name the poem and the poet.
- 3) He sways his head from side to side, with movements like a snake;
 And when you think he's half asleep, he's always wide awake.
 a) Who is 'He' in the above lines?
 b) Explain the comparison made in the first line.
 c) What does 'he' pretend to do?
- D.2. Answer any three of the following questions in about 30- 40 words each: 2x3= 6
- a) Who was Chunilal? What did he want from Bepin Babu?
 b) For how long do you think Connie had kept Jim's letter? Give reasons for your answer.
 c) Where had Tilly seen the sea behaving in the same strange fashion?
 d) In the poem 'Geography lesson', mention two things that are not clear from the height.
- D.3. Answer any one the following questions in about 75 words. 5
- Why did Bepin Babu hesitate to visit Mr. Mukherjee? Why did he finally decide to phone him?
OR
 How are Meghna and Almas's stories similar?
- D.4. Answer any three of the following questions in about 30-40 words each: 2x3=6
- a) In what way Bassanio seek Antonio's help and why?
 b) In what ways did the witches cheat Macbeth?
 c) What happened when Cesario visited Olivia?
 d) Why did Shylock hate Antonio?
- D.5. Answer any one of the following questions in about 75 words: 4
- Describe the confusion that took place when Viola met Sebastian.
OR
 What happened at the banquet which Macbeth held for his Lords?



सामान्य निर्देश -

- (क) प्रश्नों के सभी उपभागों के उत्तर क्रमशः लिखिए।
(ख) वर्तनी की शुद्धता एवं प्रभावशाली भाषा अपेक्षित है।
(ग) इस प्रश्न में प्रश्नों की कुल संख्या 09 है।

खण्ड - 'क'

प्रश्न 01. निम्नलिखित गद्यांश को पढ़कर पूछे गए प्रश्नों के उपयुक्त उत्तर दीजिए -

राष्ट्रीय एकता एक प्रबल शक्ति है। यह वीरता और बलिदान के कार्यों को बढ़ावा देती है और जनता में आत्मविश्वास उत्पन्न करती है। यह देशवासियों को उन्नति के पथ पर आगे बढ़ने की प्रेरणा देती है। संसार के लोगों ने राष्ट्रीय एकता की भावना से प्रेरित होकर अपूर्व उन्नति की है। राष्ट्रीय एकता जनता को व्यक्ति और समाज दोनों रूपों में प्रोत्साहन और प्रेरणा देती है। जब महात्मा गाँधी ने असहयोग आंदोलन आरंभ किया तो समूचा राष्ट्र एक भावना से गांधी जी के साथ हो लिया। एकता और संगठन की भावना जागृत करने के लिए उन्होंने नगरीय और ग्रामीण क्षेत्रों पर आधारित अनेक रचनात्मक कार्यक्रम आरंभ किए। आज़ादी के बाद समस्त भारत भावनात्मक एकता के सूत्र में बँधा है। चीनी अतिक्रमण इसका जीता-जागता प्रमाण प्रस्तुत करता है। इस कठिन समय में भारतवासियों की भावनात्मक एकता एकदम व्यावहारिक एकता में परिवर्तित हो गई और आक्रांत चीन की चुनौती का पूरे राष्ट्र ने ललकार के साथ उत्तर दिया। इस समय हमारे देश को उसी प्रकार की भावनात्मक एकता की आवश्यकता है।

- (क) राष्ट्रीय एकता देशवासियों को क्या प्रेरणा देती है ? (1)
(ख) गाँधी जी ने किस भावना को जागृत करने के लिए रचनात्मक कार्यक्रम आरंभ किए ? (1)
(ग) किसके बल पर भारतवासियों ने चीनी आक्रमण का सामना किया ? (1)
(घ) वर्तमान समय में देश को किस प्रकार की एकता की आवश्यकता है ? (1)
(ङ) गद्यांश का उपयुक्त शीर्षक लिखिए। (1)

खण्ड - 'ख'

प्रश्न 02. (i) निम्नलिखित वाक्यों में से किन्हीं तीन के समुच्चयबोधक शब्द छाँटकर उनके भेद लिखिए - (3)

- (क) अजय और अमर टेनिस खेल रहे हैं।
(ख) नियमित रूप से व्यायाम करो, ताकि स्वस्थ रह सको।
(ग) पढ़ाई पर ध्यान दो अन्यथा फेल हो जाओगे।
(घ) राम को पुस्तक दे सकती हूँ लेकिन शिखर को नहीं।

(ii) निम्नलिखित वाक्यों में से किन्हीं तीन के उचित विस्मयादिबोधक शब्द भरकर वाक्य पूर्ण कीजिए - (3)

- (क) कितनी सुंदर झील है।
(ख) कितनी गंदगी है।
(ग) तुमने तो कमाल कर दिया।
(घ) मैं तो गिर गया।

(iii) नीचे दिए गए किन्हीं दो संधि रूपों के सामने उनके भेदों के नाम लिखिए - (2)

- (क) सूर्य + अस्त (सूर्यास्त)
(ख) निः + बल (निर्बल)
(ग) अनु + छेद (अनुच्छेद)

(iv) निम्नलिखित में से किन्हीं दो में संधि कीजिए - (2)

- (क) यदि + अपि
(ख) एक + एक
(ग) उत् + नति

- (v) निम्नलिखित में से किन्हीं दो के संधि-विच्छेद कीजिए – (2)
(क) गायक (ख) स्वागत (ग) सज्जन
- (vi) दिए गए शब्दों में से किन्हीं तीन के उपसर्ग एवं मूलशब्द अलग करके लिखिए – (3)
(क) आजन्म (ख) बदबू (ग) अनपढ़ (घ) प्रगति
- (vii) निम्नलिखित में से किन्हीं तीन प्रत्यय का प्रयोग करके एक-एक सार्थक शब्द बनाइए – (3)
(क) अक्कड़ (ख) आवट (ग) वाला (घ) आई
- (viii) निम्नलिखित शब्दों में से किन्हीं दो के दो-दो पर्यायवाची शब्द लिखिए – (2)
(क) पक्षी (ख) पत्ता (ग) पेड़
- (ix) निम्नलिखित अनेकार्थक शब्दों में से किन्हीं दो के दो-दो अलग-अलग अर्थ लिखिए– (2)
(क) अंबर (ख) कर (ग) कनक
- (x) रिक्त स्थानों की पूर्ति उचित लोकोक्ति से कीजिए – (किन्ही तीन) (3)
(क) उसने तुम पर हाथ उठाया, तुमने भी अवश्य कुछ किया ही होगा; क्योंकि ।
(ख) कमेटी में पाँच सदस्य हैं, जिनमे कोई तालमेल नहीं है सबकी है।
(ग) दस मील चलकर मेला देखने पहुँचे, पर वहाँ दो-चार दुकानों के सिवा कुछ न था।
यह तो वाली बात हुई।
(घ) तुम इनमें से किसी पर भी भरोसा नहीं कर सकते। ये चारों हैं।
- प्रश्न 03. अपने मित्र को विद्यालय में सर्वश्रेष्ठ वक्ता घोषित किए जाने पर बधाई-पत्र लिखिए। (5)
अथवा
बैंक में नया खाता खुलवाने के लिए बैंक-प्रबंधक को पत्र लिखिए।
- प्रश्न 04. निम्नलिखित विषयों में से किसी एक विषय पर लगभग 80-100 शब्दों में अनुच्छेद लिखिए– (5)
- (क) मैं नदी हूँ (ख) समय का सदुपयोग
- भूमिका
 - नदियों की विशेषताएँ/रूप
 - नदियों से लाभ
 - नदियों को प्रदूषित करना
 - लक्ष्यों तक पहुँचना
 - उपसंहार
- (ग) आज़ादी का अमृत महोत्सव
- प्रस्तावना
 - आज़ादी का 75 वाँ साल
 - प्राचीन सम्य देशों में अग्रगण्य
 - गौरवशाली इतिहास, शिक्षा, संस्कृति कला और विज्ञान में बढ़ते कदम
 - सभी धर्मों और संस्कृतियों की भूमि
 - उपसंहार
- खण्ड – 'ग'
- प्रश्न 05. निम्नलिखित काव्यांश को ध्यान से पढ़कर पूछे गए प्रश्नों के उत्तर दीजिए – (2)
- हम तो केवल यह आँकते हैं
कि एक देश की धरती
दूसरे देश को सुगंध भेजती है
और वह सौरभ हवा में तैरते हुए
पक्षियों की पाँखों पर तिरता है।
और एक देश का भाप
दूसरे देश में पानी
बनकर गिरता है।
- (क) कवि एवं कविता का नाम लिखिए। (2)

- (ख) "एक देश की धरती दूसरे देश को सुगंध भेजती है" – कथन का भाव स्पष्ट कीजिए। (2)
(ग) रेखांकित शब्दों के अर्थ लिखिए। (1)

प्रश्न 06. निम्नलिखित गद्यांश को ध्यान से पढ़कर पूछे गए प्रश्नों के उत्तर दीजिए –

बस सचमुच चल पड़ी और हमें लगा कि यह गाँधी जी के असहयोग और सविनय अवज्ञा आंदोलनों के वक्त अवश्य जवान रही होगी। उसे ट्रेनिंग मिल चुकी थी। हर हिस्सा दूसरे से असहयोग कर रहा था। पूरी बस सविनय अवज्ञा आंदोलन के दौर से गुज़र रही थी। सीट का बॉडी से असहयोग चल रहा था। कभी लगता सीट बॉडी को छोड़कर आगे निकल गई है। कभी लगता कि सीट को छोड़कर बॉडी आगे भागी जा रही है। आठ-दस मील चलने पर सारे भेदभाव मिट गए। यह समझ में नहीं आता था कि सीट पर हम बैठे हैं या सीट हम पर बैठी है।

- (क) लेखक और पाठ का नाम लिखिए। (2)
(ख) सविनय अवज्ञा का उपयोग व्यंग्यकार ने किस रूप में किया है ? (2)
(ग) 'सविनय अवज्ञा आंदोलन' किसके नेतृत्व में हुआ था ? (1)

प्रश्न 07. निम्नलिखित प्रश्नों में से किन्हीं पाँच प्रश्नों के उत्तर 30-40 शब्दों में दीजिए—

(5x4=20)

- (i) बचपन में लेखक अपने मामा के गाँव चाव से क्यों जाता था और बदलू को 'बदलू मामा' न कहकर 'बदलू काका' क्यों कहता था ?
(ii) कवि ने पक्षी और बादल को भगवान के डाकिए क्यों बताया है ? स्पष्ट कीजिए।
(iii) " यह सबसे कठिन समय नहीं है?" यह बताने के लिए कविता में कौन-कौन से तर्क प्रस्तुत किए गए हैं ? स्पष्ट कीजिए।
(iv) बदलू के मन में ऐसी कौन-सी व्यथा थी जो लेखक से छिपी न रह सकी।
(v) लोगों ने सलाह दी कि समझदार आदमी इस शाम वाली बस से सफ़र नहीं करते। लोगों ने यह सलाह क्यों दी?
(vi) दोषों का पर्दाफ़ाश करना कब बुरा रूप ले सकता है ?
(vii) लेखक ने स्वीकार किया है कि लोगों ने उन्हें भी धोखा दिया है फिर भी वह निराश नहीं है। आपके विचार से इस बात का क्या कारण हो सकता है ?

प्रश्न 08. निम्नलिखित प्रश्नों में से किसी एक प्रश्न का उत्तर दीजिए—

(3)

- (i) आपके सपनों का भारत कैसा होना चाहिए ? लिखिए।
(ii) पक्षी और बादल की चिट्ठियों के आदान-प्रदान को आप किस दृष्टि से देख सकते हैं ?

प्रश्न 09. निम्नलिखित प्रश्नों के संक्षिप्त उत्तर दीजिए—

(7)

- (i) 'क्या निराश हुआ जाय' पाठ के लेखक का नाम लिखिए।
(ii) 'बस की यात्रा' पाठ की विधा क्या है ?
(iii) नीचे लिखे शब्दों में से किसी एक का वाक्य में प्रयोग कीजिए। ध्यान रहे, एक ही शब्द वाक्य में दो बार आए और अर्थ में बदलाव हो—
हार, जल
(iv) "झूठ और फरेब का रोज़गार करने वाले फल-फूल रहे हैं।" – इसका परिणाम क्या होगा ?
(v) निम्नलिखित संज्ञा शब्दों के भेद बताइए – (i) सुंदरता (ii) गाँव
(vi) 'महान आदमी' में विशेषण चुनकर उसके भेद लिखें।
(vii) 'बखत' एवं 'उमर' शब्दों के मानक रूप लिखिए।



दिल्ली-पब्लिक-स्कूल, भिलाईनगरम्
अर्द्धवार्षिकी परीक्षा 2022-23
विषय: - संस्कृतम्

कक्षा - अष्टमी
समय: - 1.30 होरा:
परीक्षार्थिन: नाम - -----

कक्षा/वर्ग: - -----

पूर्णाङ्कः - 40
दिनाङ्कः - 07/09/22
अनुक्रमाङ्कः - -----

{1} अधोलिखितं गद्यांशं पठित्वा प्रश्नानाम् उत्तराणि लिखत -

अद्य सम्पूर्णविश्वे "डिजिटल इण्डिया" इत्यस्य चर्चा श्रूयते | अस्य पदस्य कः भावः इति मनसि जिज्ञासा उत्पद्यते | कालपरिवर्तनेन सह मानवस्य आवश्यकताऽपि परिवर्तते | प्राचीनकाले ज्ञानस्य आदान-प्रदानं मौखिकं आसीत्, विद्या च श्रुतिपरम्परया गृह्यते स्म | अनन्तरं तालपत्रोपरि भोजपत्रोपरि च लेखनकार्यम् आरब्धम् |

I) एकपदेन उत्तरत - (केवलं - 2)

1 x 2 = 2

- क) मनसि का उत्पद्यते ? ----- (जिज्ञासा / चर्चा)
ख) विद्या कया गृह्यते स्म ? ----- (चिन्तया / श्रुतिपरम्परया)
ग) मानवस्य का परिवर्तते ? ----- (इण्डिया / आवश्यकता)

II) पूर्णवाक्येन उत्तरत - (एकम् एव)

1 x 1 = 1

- क) प्राचीनकाले कस्य आदान-प्रदानं मौखिकं आसीत् ? -----
ख) "डिजिटल इण्डिया" इत्यस्य चर्चा कुत्र श्रूयते ? -----

{2} कोष्ठकात् पदानि चित्वा प्रश्नानाम् उत्तराणि लिखत- (केवलं-5)

1 x 5 = 5

[दधिपुच्छः, लुब्धस्य, कालपरिवर्तनेन, ध्येयस्मरणं, सिंहगर्जनेन, माधुर्यम्]

- क) सततं किं करणीयम् ? -----
ख) केन सह मानवस्य आवश्यकता परिवर्तते ? -----
ग) गुहायाः स्वामी कः आसीत् ? -----
घ) मधुमक्षिका किं जनयति ? -----
ङ) कस्य यशः नश्यति ? -----
च) गुहा केन प्रतिध्वनिता ? -----

{3} कोष्ठकात् हिन्दी-शब्दानां कृते संस्कृतपदानि लिखत -

½ x 6 = 3

[तृणम्, पुच्छः, कटुकम्, लुब्धः, कृपणः, मधुमक्षिका]

- क) कड़वा ----- ख) कंजूस ----- ग) तिनका -----
घ) पूँछ ----- ङ) मधुमक्खी ----- च) लोभी -----

{4} कोष्ठकात् पदानि चित्वा रेखाङ्कितपदानि आधृत्य प्रश्ननिर्माणं कुरुत - (केवलं - 4) $1 \times 4 = 4$
[कुत्र, काः, किमर्थम्, के, कीदृशः]

- क) नद्यः सुस्वादुतोयाः भवन्ति | -----
ख) क्षुधार्तः सिंहः आहारं न प्राप्तवान् | -----
ग) वयम् उपचारार्थं चिकित्सालयं गच्छामः | -----
घ) शृगालः बिले प्रविश्य सिंहस्य भोज्यं भविष्यति | -----
ङ) गुणजेषु गुणाः भवन्ति | -----

{5} विलोमपदानि योजयत -

$\frac{1}{2} \times 4 = 2$

क	ख	उत्तराणि
पुरतः -	विरक्तिः	-----
भीतिः -	परकीयम्	-----
अनुरक्तिः -	साहसः	-----
स्वकीयं -	पृष्ठतः	-----

{6} उचितकथनानां समक्षम् "आम्," अनुचितकथनानां समक्षं "न," इति लिखत - $1 \times 3 = 3$

- क) पुरतः चरणं निधेहि | ----- ख) निजनिकेतनं गिरिशिखरे अस्ति | -----
ग) स्वकीयं बलं बाधकं भवति | -----

{7} उचित-विभक्तिपदैः रिक्तस्थानानि पूरयत - (केवलं - 3)

$1 \times 3 = 3$

- क) अलं ----- | (क्रोधेन / क्रोधः)
ख) ----- उभयतः वृक्षाः सन्ति | (मन्दिरम् / मन्दिरस्य)
ग) अहं ----- सह खेलामि | (मित्रेण / मित्राणि)
घ) ----- नमः | (शिवाय / शिवम्)

{8} मञ्जूषातः चित्वा सङ्ख्यानां कृते संस्कृतपदानि लिखत -

$\frac{1}{2} \times 4 = 2$

[पञ्चचत्वारिंशत्, अष्टादश, षड्विंशतिः, चत्वारिंशत्]

- क) 40. ----- ख) 26. ----- ग) 45. ----- घ) 18. -----

{9} मञ्जूषातः उचित-अव्ययपदैः रिक्तस्थानानि पूरयत - (केवलं - 4) $\frac{1}{2} \times 4 = 2$

[कति, प्रातः, च, सर्वदा, श्वः,]

- क) ----- कमलं विकसति | ख) अत्र ----- छात्राः सन्ति ?
ख) रामः लक्ष्मणः ----- धावतः | घ) ----- सत्यं वद |
ङ) ----- परीक्षा न भविष्यति |

{10} कोष्ठकात् प्रकृति-प्रत्ययौ संयोज्य विभज्य वा लिखत - $1 \times 3 = 3$

क) अहं खेल + तुमुन् ----- गच्छामि | (खेलितुम् / खेलतुम्)

ख) छात्राः पठित्वा ----- + ----- आगच्छन्ति | (पठि + त्वा / पठ् + क्त्वा)

ग) बालकः धाव् + क्त्वा ----- विद्यालयं गच्छति | (धावत्वा / धावित्वा)

{11} उचित-शब्दरूपैः रिक्तस्थानानि पूरयत - (केवलं - 8) $\frac{1}{2} \times 8 = 4$

विभक्तिः -	एकवचनम्	द्विवचनम्	बहुवचनम्
प्रथमा	-----	पितरौ	-----
द्वितीया	नदीम्	-----	नदीः
तृतीया	-----	मुनिभ्याम्	मुनिभिः
चतुर्थी	रामाय	रामाभ्याम्	-----
पञ्चमी	-----	-----	फलेभ्यः
षष्ठी	कस्य	-----	केषाम्
सप्तमी	-----	रामयोः	-----

{12} उचितधातुरूपैः रिक्तस्थानानि पूरयत - (केवलं - 8) $\frac{1}{2} \times 8 = 4$

पुरुषः -	एकवचनम्	द्विवचनम्	बहुवचनम्
प्रथमः	-----	-----	पठिष्यन्ति
मध्यमः	-----	वदिष्यथ	-----
उत्तमः	दास्यामि	दास्यावः	-----
प्रथमः	नमेत्	-----	-----
मध्यमः	-----	लिखेतम्	लिखेत
उत्तमः	-----	-----	पठेम

{13} संस्कृते अनुवादं कुरुत - (केवलं - 2) $1 \times 2 = 2$

क) हम सब लिखते हैं | -----

ख) तुम खेलोगे ? -----

ग) छात्रा पढ़ती है | -----



General Instructions :

- (i) All questions are compulsory.
- (ii) The question paper consists of 30 questions, divided into 4 sections. Section A, B, C and D.
- (iii) There are 30 questions in the question paper.
 Section A contains 6 questions of 1 mark each. Section B contains 6 questions of 2 marks each.
 Section C contains 10 questions of 3 marks each. Section D contains 8 questions of 4 marks each.
- (iv) There is no over all choice. However, internal choice has been provided in two questions of 1 mark each, 2 questions of 2 marks each, 4 questions of 3 marks each and 3 questions of 4 marks each.
- (iv) Use of calculator is not permitted.
- (v) Drawings are not to the scale.

SECTION - A

1X6=06

- Q.01 Write Additive inverse of $\frac{3}{4}$
- Q.02 In a parallelogram ABCD, $\angle A + \angle B = \dots\dots\dots$
- Q.03 Sum of all the angles in any quadrilateral is $\dots\dots\dots$
- Q.04 Compute $2^2 + 3^2 = \dots\dots\dots$

OR

- Q.05 Compute $\sqrt{25} + \sqrt{64} = \dots\dots\dots$
- Q.05 Find the cube root of 1000.

OR

- Q.06 Compute $1^3 + 2^3 + 3^3 = \dots\dots\dots$
- Q.06 Convert 1:2 into percentage

SECTION - B

2X6=12

- Q.07 Apply distributive LAW and find value of $\frac{1}{2} \times 7 + \frac{1}{2} \times 93 = \dots\dots\dots$
- Q.08 Rhombus ABCD, if $\angle A = 60^\circ$, then find $\angle B$ and $\angle C$.
- Q.09 Find two rational numbers between $\frac{1}{4}$ and $\frac{3}{5}$.

OR

- Q.10 Simplify using commutative and Associative Laws. $\frac{3}{11} + (\frac{2}{9} + \frac{5}{22})$
- Q.10 Write a Pythagorean Triplet, whose one member is 3.

OR

- Find square Root of 64. Using prime factorization.
- Q.11 Find smallest integer by which 392 must be multiplied so that the product is a perfect cube.
- Q.12 If MOHINI spent 90% of her pocket money. Now she has ₹ 4000 left. Find her actual expenditure during shopping.

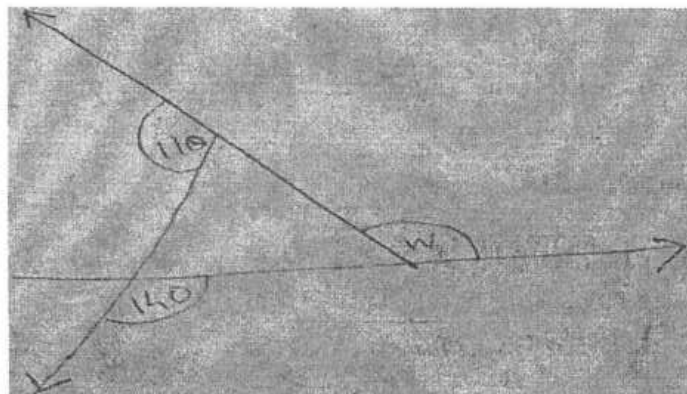
SECTION - C

3X10=30

- Q.13 Verify the property $a(b + c) = ab + ac$. If $a = \frac{2}{3}$, $b = \frac{3}{4}$, $c = \frac{4}{5}$.
- Q.14 Sheetal has total ₹ 520 with her in the denomination of ₹ 20 and ₹ 50 notes. If ratio of these currency notes is 3:4 then find how many notes of each denomination she has?

OR

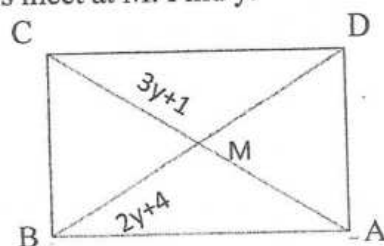
- Find x if : $(x + 2)(x + 3) = x^2 + 6x + 5$
- Q.15 Find w° in the following figure. Mention properties used



:: 2 ::

OR

- Q.15 ABCD is a Rectangle. Its diagonals meet at M. Find y.



Also determine the lengths of AC & BD.

- Q.16 Define convex, concave and Regular polygons (with Rough sketches).

- Q.17 Construct square PQRS with side 5 cm. (No steps of construction)

OR

Construct Rectangle ABCD with sides 5 and 3 cm. (No steps of construction)

- Q.18 Find $\sqrt{121}$. Use Long Division method.

- Q.19 In a class total pupils are 40. If the class teacher wishes to make them stand in the form of a solid square. Then find the minimum number of pupils to be left out in this arrangement.

OR

Find the perimeter of square ABCD whose area is 144 cm^2 .

- Q.20 Raju makes a cuboid of plasticine of sides (5, 5, 2) cm. How many such cuboids will he need to make/form a CUBE?

- Q.21 Ravi purchased a pair of jeans for ₹ 3500 and two shirts for ₹ 1250 each. He was offered 10% discount on the marked prices of ALL the items, he bought. Calculate the amount paid by him for his 3 items. (3500 and 1250 each are marked prices).

- Q.22 Find compound interest if $P=10,000$ $R\%=10\%$ and number of years =3.

SECTION – D

4X8=32

- Q.23 Vijay bought two fans for ₹ 1200 each. He sold one at 5% loss and the other at 10% profit. Find the overall profit or loss made by him in this transaction.

- Q.24 Compute $(\sqrt{1^3 + 2^3 + 3^3 + 4^3}) \div 10 = \dots\dots\dots$

- Q.25 Find the smallest number to be added to 1021 to make it a perfect square. Also find the square Root of the resulting number.

OR

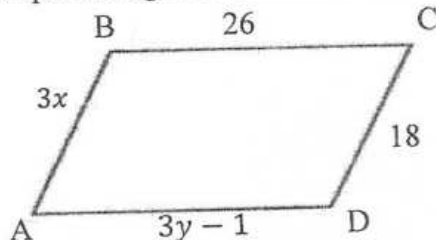
Find the smallest square number which is exactly divisible by 8, 12 and 20.

- Q.26 Construct Rhombus ABCD if $AB=5 \text{ cm}$ and $\angle B = 60^\circ$. (No steps)

OR

Construct Rhombus ABCD if $AC=8 \text{ cm}$ and $BD=6 \text{ m}$. (No steps)

- Q.27 Given parallelogram ABCD. Find x & y.



also find its perimeter

- Q.28 A car travels a certain distance in 4 hours. If it had travelled 10 km/hr faster than same distance would take only 3 hours. Find the distance.

OR

Divide 100 into 2 parts such that twice larger part equals thrice smaller part.

- Q.29 The product of 2 consecutive integers is greater than square of the smaller integer by 30. Find both the integers.

- Q.30 Simplify $\frac{-2}{3} \times \frac{3}{5} + \frac{5}{2} - \frac{3}{5} \times \frac{1}{6}$



DELHI PUBLIC SCHOOL, BHILAI

Date : 19.09.2022

FIRST TERM EXAMINATION-2022

Time : 3 Hrs.

Class : VIII

Subject : Social Science

Max. Marks : 80

General Instructions:

- There are 32 questions. All are compulsory.
- Marks of each question are indicated against the question.
- Questions from Sl. No. 1 to 14 are very short answer questions. Each question carries 1 mark.
- Questions from Sl. No. 15 to 26 are short answer questions. Each question carries 3 marks.
- Questions from Sl. No. 27 to 30 are long answer questions that carry 5 marks each.
- Question no. 31 is diagram from Geography of 5 marks.
- Question no. 32 is based on map work in History 5 marks.

- Q.01 Who is called the “Tiger of Mysore”? (1)
- Q.02 Name the new system of revenue collection devised by an Englishman Halt Mackenzie in 1822. (1)
- Q.03 Who was the first Governor General of India? (1)
- Q.04 Name the Governor-General who devised the policy of Doctrine of Lapse? (1)
- Q.05 Who was the last Viceroy of India? (1)
- Q.06 Which factor of soil formation determines the thickness of soil profile? (1)
- Q.07 What is the term for balancing the need to use the resources and also conserve them for the future? (1)
- Q.08 What makes an object or substance a resource. (1)
- Q.09 Name the most appropriate method to check the soil erosion on the steep slopes. (1)
- Q.10 What is the term for an exclusive right over any idea or invention? (1)
- Q.11 Which system refers to the existence of more than one level of government in the country? (1)
- Q.12 The Lok Sabha is usually elected once every how many years? (1)
- Q.13 How many members are nominated by the President for the Rajya Sabha? (1)
- Q.14 Name the highest law making body of India? (1)
- Q.15 What is history? (3)
- Q.16 What attracted European trading companies to India? (3)
- Q.17 Describe the main features of the Permanent Settlement. (3)
- OR**
- Mention problems which arose with new Munro System of fixing revenue?
- Q.18 What problems did shifting cultivators face under British rule? (3)
- Q.19 Why does a democratic country need a Constitution? (3)
- Q.20 What is secularism? (3)
- Q.21 What is Universal Adult Franchise? (3)
- OR**
- What are the functions of the Parliament?

- Q.22 Why is it important to separate Religion from the State? (3)
- Q.23 Why are some species of plants and animals on the verge of extinction? (3)
- Q.24 Why are resources distributed unequally over the earth? (3)
- Q.25 Why is land considered an important resource? (3)
- Q.26 What is sustainable development? (3)
- Q.27 Why were the ryots reluctant to grow indigo? (5)
- Q.28 Explain the system of Subsidiary Alliance? (5)
- OR**
- Why did the British government do surveys in India? What surveys did they do?
- Q.29 What do you understand by unpopular and controversial laws? How do people pressurise the Parliament to change such a law? (5)
- OR**
- What is constitution? Explain any four important features of Indian Constitution.
- Q.30 Mention any five principles of sustainable development. (5)
- OR**
- Suggest five methods of soil conservation.
- Q.31 Make a neat and labelled diagram of soil profile. (5)
- Q.32 In the given political map of India locate and label **any five**: - (5)
- | | |
|---------------|-------------|
| (i) Delhi | (ii) Madras |
| (iii) Plassey | (iv) Mumbai |
| (v) Jhansi | (vi) Buxar |



DELHI PUBLIC SCHOOL, BHILAI

Date : 08.09.2022
Class : VIII

FIRST TERM EXAMINATION-2022-23
Subject : General Knowledge

Time : 50 Minutes
Max. Marks : 50

Name of the student: _____ Class/Sec. _____ Roll No. _____

Invigilator's Signature _____ Marks obtained : ____/50

GENERAL INSTRUCTIONS:

- (i) All questions are compulsory.
- (ii) Each question carries 1 mark.

Q.1 (a) Name the first woman to fly over the North Pole. She is known as the 'Ice Woman'. _____

(b) What is the term used for a migrating bird that is just passing through ? _____

(c) Name the first woman President of India. _____

(d) Who is the author of 'The Man of Destiny'? _____

(e) Who is known as the 'Nightingale of India'? _____

(f) Name the first Chinese astronaut who spent 20 minutes walking in the space on September 27, 2008.

(g) Name the scientist who discovered radium. _____

(h) Name the famous museum where Mahatma Gandhi's wax statue is present. _____

(i) Name the place where Indian Laws are made. _____

(j) Who is known as the 'Missile Man of India'? _____

Q.2 (a) Name India's highest railway station. _____

(b) Name India's oldest railway station. _____

(c) Which is the third letter on the left of 'L' ? _____

(d) Which is one of the largest forts in India ? _____

(e) Who wrote the book 'An Island of Trees'? _____

(f) Which fort is known as 'Golden Fort'? _____

(g) Name the Canadian Scientist who invented 'Blissymbol Printer'. _____

(h) Who is the author of 'War and Peace'? _____

(i) Name the Russian Cosmonaut who became the first woman to walk in the space. _____

(j) Who built the 'Red Fort'? _____

Q.3 Write the Name of inventors who invented following inventions :-

- (i) Cement _____
- (ii) Neutron bomb _____
- (iii) Mobile Phone _____
- (iv) Potato Chips _____
- (v) Parachute _____

Q.4 Match the following :

		Correct answer
(i) Robot Building	(i) William Wordsworth	_____
(ii) Agra Fort	(ii) Omniscient	_____
(iii) "The Child is father of man"	(iii) London (UK)	_____
(iv) A Person who knows everything	(iv) a Famous building in Bangkok	_____
(v) Bond Street	(iv) built by Akbar	_____

Q.5 Fill in the blanks :

- (a) In the Bollywood film _____ a deaf boy makes it to the Indian Cricket team with the help of his Coach.
- (b) A person who composes poems is known as _____.
- (c) _____ birthday is celebrated as 'Teacher's Day'.
- (d) _____ have the same amount of rainfall.
- (e) In India, _____ is officially given the honour of the Father of the Nation.
- (f) Usha Mehta Savitribai Phule started an underground radio station in 1942 known as _____.
- (g) A cricket team consists of _____ playing members.
- (h) Pindari Glacier Trek is one of the highest peaks of India situated on the edge of _____.
- (i) Isohel have the same amount of _____.
- (j) Hinton's Oak tree is found only in _____.

Q.6 (a) What is sunlight therapy called ? _____

- (b) Name the fairy tale inspired building in Poland. _____
- (c) Who said "It is an unfortunate fact that we can secure peace only by preparing for war"? _____
- (d) Who sailed around Australia and mapped much of its coastline? _____
- (e) Name the most expensive and popular shopping street of New York, USA. _____

Q.7 Current Affairs :

- (a) Who is the President of India? _____
- (b) Which state launched the 'Vidya Rath-School on Wheels' project? _____
- (c) The movie "Rocketry", is based on the life of which Indian scientist? _____

- (d) Where is "Statue of Equality" situated in India? _____
- (e) How many medals has India won in the Commonwealth Games 2022, held in Birmingham? _____



DELHI PUBLIC SCHOOL, BHILAI

Date : 06.09.2022

FIRST TERM EXAMINATION-2022

Time : 1 1/2 Hrs.

Class : VIII

Subject : Information and Communication Technology

Max. Marks : 50

Q1. Fill in the blanks: (one mark each) 5

- a. In Python, the non-zero value is interpreted as _____.
b. When you open an image in GIMP, it opens as a new _____.
c. We can hide a layer by clicking on the _____ icon.
d. In _____ topology every node is connected to each other node.
e. The collection of related records is called _____.

Q2. True or False: (one mark each) 5

- a. There are two types of databases.
b. A server is also called as host computer.
c. Layers cannot be customised.
d. We cannot create our own functions in python.
e. Delete Record option is used to delete a record.

Q3. Multiple choice questions: (one mark each) 10

- 1. Which of the following conditional statement is used to test multiple conditions?
2. Which of the following functions is an in-built function in Python?
3. Which of the following menus used to apply filters on an image?
4. Which palette displays all layers?
5. A computer network that spans across a city can be called a _____.
6. _____ describe a computer that is connected to a network.
7) Which of the following is not a data type in LibreOffice Base?
8) Arranging the record in a particular order is called _____.
9) _____ can convert the digital data into analog signal and vice verse.
10) Hiding a layer means to make the layer temporarily.

Q4 Answer the following questions (2marks*4) 8

- 1. What is protocol?
2. What is flat file database?
3. What are layers?
4. What is looping?

Q5. Answer the following questions (3marks*4) 12

- 1. What is the difference between a webpage and a website?
2. What are the rules for writing a field name in database?
3. What are the steps to delete a layer?
4. Distinguish between continue and break statements.

Q6. Answer any two questions (5 marks*2) 10

- 1. Draw the flowchart of nested if statement.
2. Write the steps used to apply filters on an image?
3. What is a computer network? Write any 3 advantages.