



General Instructions :

- > Attempt all the questions in each section before going to the next section in the same order.
- > All the answers must be correctly numbered and neatly written down.
- > Do not copy the questions.
- > The paper consists of 4 sections.

Section – A – Reading : 16 Marks

Section – B – Writing : 18 Marks

Section – C – Grammar : 16 Marks

Section – D – Literature : 30 Marks

Section – A – Reading : 16 Marks

A.1 Read the passage given below and answer the questions that follow:

01. Vegetarians find it difficult to nourish their body with the required essential nutrients through their normal food habits. The important nutrients that vegetarians generally lack are sufficient intake of Calcium, Vitamin B12, Zinc and Iron.
02. In contrast, people who eat meat, fish and poultry get benefited by these nutrients. Hence vegetarians should take extra care while planning their daily diet to ensure that there are no nutritional deficiencies.
03. The recommended balanced vegetarian diet consists of whole grains, nuts, dry and fresh fruits as well as vegetables, sprouts and pulses along with milk, ghee, oil and other dairy products.
04. Proteins contain amino acids that are the building blocks for healthy skin, cartilage, bones, muscles, enzymes, hormones and blood. Soya bean and milk alone contain about nine of the essential amino acids required by the body.
05. Good sources of vitamin B1 include rice bran, peanuts, legumes as well as unrefined cereals and whole grains. Cereals and soymilk are important sources of vitamin D and B12. Citrus fruits that are rich in vitamin C also help in the absorption of Iron.

Answer the following questions:

- (a) Which important nutrients do vegetarians generally lack? (01)
- (b) What is the recommended balanced vegetarian diet? (01)
- (c) What is the building block for healthy skin? (01)
- (d) Write two sources of essential amino acids. (01)
- (e) Rice bran is rich in Vitamin (01)
- (f) Which food is rich in vitamin C ? (01)
- (g) Choose a word which is the antonym of 'Surplus'. (Para – 2)

(i) extra	(ii) deficiency	(iii) contrast	(iv) nutrient	(01)
-----------	-----------------	----------------	---------------	------
- (h) Choose a word which means same as 'necessary'. (para 4)

(i) contain	(ii) cartilage	(iii) hormone	(iv) essential	(01)
-------------	----------------	---------------	----------------	------

A.2 Read the poem carefully and answer the questions that follow :

Angry

- I. Sometimes when the day is bad
And someone's made me very sad
Or I've been given angry stares
I go behind the front porch stairs.
- II. There curled up with chin on knee
I like to be alone with me
And listen to people talk
And hurry by me on the walk.
- III. There I sit without a sound
And draw stick pictures on the ground.
If I should tire of it all,
I throw some pebbles at the wall.
- IV. After I have been there a while
And find that I can almost smile,
I brush me off and count to ten
And try to start the day again.

Answer the following questions:

- (a) Where does the speaker go when he is angry ? (01)
- (b) What does the speaker like to do when he is alone and angry ? (01)

- (c) What does the poet do on the ground ? (01)
- (d) What does he do with pebbles ? (01)
- (e) What does the speaker do after brushing himself off ? (01)
- (f) What does the speaker find after being there for a while ? (01)
- (g) Choose a word from the poem which is the antonym of "look away" (stanza 1). (01)
 - (i) porch (ii) stairs (iii) stare (iv) front
- (h) Choose a word from the poem which means the same as "be quick". (stanza 2) (01)
 - (i) curled (ii) hurry (iii) chin (iv) alone

Section – B – Writing : 18 Marks

- B.1** Read the following telephonic conversation between Rahul and Sonu. Sonu is about to leave for school and will not be able to meet his brother Mohit. He leaves a message for him. Write the **message** in about 50 words. (5)
- Rahul - Hello! Can I speak to Mohit please?
 Sonu - He is not at home. I am his brother. Would you like to leave a message for him?
 Rahul - I am his friend Rahul. Kindly tell him that tomorrow we are going to Civic Centre, where a book fair is being held. Tell him to call me in the evening, if he is interested in going with us.
- B.2** Write an **advertisement** for the sale of a second hand car, in about 50 words. (5)
- B.3** You have recently joined a new school. You have been able to make a few friends. Record your feelings about them in a **diary entry**, in not more than 100-120 words. You can use the given hints : (8)

Hints : Beautiful campus spacious classrooms helpful teachers, wanted to create good impression was a bit nervous sat on first bench gave introduction to classmates. Made few friends felt comfortable Friends gave me a tour to school liked it had interesting experience.

OR

Write a **paragraph** on Annual School Exhibition-2022 organised by your school. You can use the given hints.

Hints : held on 06th August, 2022 classes 6 to 8, inaugurated by the district collector held in AV hall of school campus from 9 am to 1 pm. invitation cards distributed students of all sections decorated stalls Made models, posters, charts working models Parents visited guests appreciated students efforts.

Section – B – Grammar : 16 Marks

For questions C1 to C7 choose the most appropriate answer from the given options:

- C.1** Identify the **kind of** underlined adjective (2)
- (a) There are eight participants in the competition.
 - (i) quality (ii) quantity (iii) number (iv) demonstrative
 - (b) The brave soldier defended the country.
 - (i) quality (ii) quantity (iii) number (iv) emphasizing
- C.2** Identify the **kinds of sentences** – (2)
- (a) oh no! I lost my purse.
 - (i) Assertive (ii) exclamatory (iii) interrogative (d) Imperative
 - (b) Give me a glass of water.
 - (i) Assertive (ii) Interrogative (iii) exclamatory (d) Imperative
- C.3** Fill in the blanks with **simple present** form of verbs given below: (2)
- (a) Kavita a lot of travel books.
 - (i) read (ii) reads (iii) reading (iv) had read
 - (b) Students a bus to school.
 - (i) takes (ii) take (iii) took (iv) taking
- C.4** Complete the sentences using appropriate **relative pronoun** (2)
- (a) This is the Doctor treated my friend.
 - (i) who (ii) whom (iii) where (iv) whose
 - (b) I have a relative, everyone appreciates
 - (i) who (ii) whom (iii) whose (iv) where
- C.5** Fill in the blanks with correct **degree of adjective** (2)
- (a) He is the scientist today.
 - (i) famous (ii) more famous (iii) most famous (iv) very famous
 - (b) Mango is than banana.
 - (i) sweet (ii) more sweet (iii) sweeter (iv) sweetest

- C.6** Complete the sentences choosing the most **appropriate verb** (2)
- (a) A dictionary and an atlas missing from the library.
(i) is (ii) are (iii) has (iv) have
- (b) Each of the girls Well.
(i) sings (ii) sing (iii) singing (iv) sang
- C.7** Choose the **abstract nouns** of the following words from the given options (2)
- (a) Know
(i) knowladge (ii) knowladgee (iii) knowledge (iv) kowledge
- (b) Child
(i) Chilhood (ii) Childood (iii) Childbood (iv) Childhood
- C.8** Give a suitable **collective noun** for the following: (2)
- (a) A number of people watching a match.
(b) A number of fruit trees.

Section – D – Literature : 30 Marks

- D.1** Read the following extracts carefully and answer the questions that follow : (3x3=9)

- I. 'As for homework, there was no more, so he quietly and slyly slipped out of the back door.'
(a) Who is 'he' in the above lines ?
(b) How did he help Patrick?
(c) Why did 'he' leave?
- II. 'That afternoon, a neighbor stopped by for a visit. Taro's father politely offered her a cup of sake'.
(a) Who came to Taro's house for a visit ?
(b) What did Taro's father offer?
(c) Where did Taro find saké ?
- III. "As over the tides
Of wind it rides"
(a) What does 'it' refer to?
(b) Where does it take ride?
(c) Name the poem and the poet.

- D.2** Answer **any three** of the following questions in about 30 to 40 words each. (2x3=6)

- (a) Why did the dog feel the need for a master?
(b) How can we find beauty in ourselves?
(c) Write the meaning of the underlined phrases.
(i) And somehow we fell out
(ii) The afternoon turned black
(d) What is a house made of ?

- D.3** Answer **any one** of the following questions in about 75-80 words: (5)

Describe Kalpana Chawla's first mission in space.

OR

Whom did the dog first choose as his master? Why did he leave that master?

- D.4** Answer **any three** of the following questions in about 30 to 40 words each. (2x3=6)

- (a) What did Abdulla of the sea request Abdulla of the land?
(b) How were the children taught at the school of the illiterate schoolmaster?
(c) Who was Shahriyar? Why did he hate women?
(d) Why did the woman stop crying? What did she do then?

- D.5** Answer **any one** of the following questions in about 75-80 words : (4)

What advice did the ass give to the ox? What was the result?

OR

Describe the scene that Abdulla of the land saw at the bottom of the sea.



दिल्ली पब्लिक स्कूल, भिलाई

दिनांक - 19.09.2022
कक्षा - छठवीं

अर्धवार्षिक परीक्षा, 2022
विषय - हिन्दी

समय - 3 घण्टे
पूर्णांक - 80

सामान्य निर्देश -

1. सभी प्रश्नों के उत्तर देना अनिवार्य है। प्रश्नों के उपभागों के उत्तर क्रमशः दीजिए।
2. इस प्रश्न-पत्र में चार खण्ड हैं। क, ख, ग और घ।
3. प्रश्नों की कुल संख्या 12 हैं।

खण्ड-क

01. निम्नलिखित अपठित गद्यांश को ध्यानपूर्वक पढ़कर पूछे गए प्रश्नों के उत्तर दीजिए - (1x5=5)
- संत कबीर ने ठीक ही कहा है "काल करे सो आज कर, आज करे सो अब" क्योंकि समय किसी की प्रतीक्षा नहीं करता। जो व्यक्ति आज का काम कल पर टाल देता है वह बाद में पछताता है। बुद्धिमान व्यक्ति समय का मूल्य जानता है और वह अपना सारा काम समय पर पूर्ण करता है। सफलता की सीढ़ियाँ वही व्यक्ति चढ़ सकता है जो समय का मूल्य समझे। आलसी और मूर्ख व्यक्ति कल की प्रतीक्षा करते हैं पर उनका कल कभी नहीं आता। समय मुट्ठी में बंद रेत की तरह होता है जिसे जितना पकड़ो उतना ही हाथ से फिसलता जाता है। समय की परवाह न करने वाले विद्यार्थी बाद में दुःखी होते हैं अतः समय का सुदपयोग करें।
- (i) गद्यांश का उचित शीर्षक दीजिए।
 - (ii) कौन व्यक्ति बाद में पछताता है ?
 - (iii) सफलता की सीढ़ी कौन चढ़ता है ?
 - (iv) कौन अपने कार्यों को कल पर डाल देते हैं ?
 - (v) कबीर दास जी क्या कहते हैं ?

खण्ड-ख

02. निम्नलिखित प्रश्नों के निर्देशानुसार उत्तर दीजिए - (कोई 3) (3)
- (i) भाषा के दोनों रूपों के नाम लिखिए।
 - (ii) व्याकरण भाषा के कितने अंगों पर विचार करता है ? केवल संख्या लिखिए।
 - (iii) 'मंच पर भाषण देना' भाषा का कौन सा रूप है ?
 - (iv) 'निबंध लेखन' भाषा का कौन सा रूप है ?
03. अति संक्षिप्त उत्तर लिखिए - (कोई 4) (4)
- (i) भाषा की छोटी सी छोटी इकाई कहलाती है।
 - (ii) ह्रस्व स्वर छोटकर लिखिए - आ, ई, अ, उ
 - (iii) वर्ण के दोनों भेदों के नाम लिखिए।
 - (iv) हिन्दी वर्णमाला में स्वरों की संख्या कितनी है ?
 - (v) स्वर के तीन भेद हैं - ह्रस्व, दीर्घ। तीसरे स्वर के भेद का नाम लिखिए।
04. निम्नलिखित प्रश्नों के उत्तर निर्देशानुसार लिखिए - (कोई 5) (5)
- (i) मित्र, अच्छा (भाववाचक संज्ञा बनाइए)
 - (ii) व्यक्तिवाचक संज्ञा छाँटिए - (हिमालय, नदी)
 - (iii) 'अध्यापक' शब्द का स्त्रीलिंग रूप लिखिए।
 - (iv) बहुवचन में बदलिए - (पंखा, रास्ता)
 - (v) 'सेविका' शब्द स्त्रीलिंग है या पुल्लिंग ?
 - (vi) 'परीक्षा' शब्द एक वचन है या बहुवचन
05. (क) नीचे दिए गए शब्दों के विलोम शब्द लिखिए - (कोई 4) (4)
- (i) उतार (ii) आदान (iii) आदर (iv) गहरा (v) नवीन
- (ख) निम्नलिखित शब्दों के दो-दो पर्यायवाची शब्द लिखिए - (कोई 4) (4)
- (i) आग (ii) असुर (iii) ईश्वर (iv) गणेश (v) चतुर
- (ग) निम्नलिखित मुहावरों में से किन्हीं दो का अर्थ लिखिए - (2)
- (i) उँगली पर नचाना (ii) छक्के छुड़ाना (iii) आँखों में धूल झोंकना
- (घ) निम्नलिखित मुहावरों का अपने वाक्यों में प्रयोग कीजिए - (3)
- (i) अंग-अंग ढीला होना (ii) कान भरना (iii) काम तमाम करना

खण्ड-ग

06. अपने विद्यालय के प्राचार्य को तीन दिनों के अवकाश हेतु प्रार्थना पत्र लिखिए। (5)
- अथवा
- अपने मित्र को उसके जन्मदिन पर शुभकामना देते हुए पत्र लिखिए।

07. निम्नलिखित विषयों में से किसी एक विषय पर लगभग 80-100 शब्दों में अनुच्छेद लिखिए -

(5)

- (i) मीठी वाणी बोलिए
- (ii) पूर्णिमा का चाँद
- (iii) जैसे ही मैं घर से निकला/निकली, वर्षा होने लगी

खण्ड-घ

08. निम्नलिखित काव्यांश को ध्यानपूर्वक पढ़कर पूछे गए प्रश्नों के उत्तर दीजिए -

साथी हाथ बढ़ाना
एक अकेला थक जाएगा, मिलकर बोझ उठाना
साथी हाथ बढ़ाना
हम मेहनत वालों ने जब भी मिलकर कदम बढ़ाया
सागर ने रस्ता छोड़ा, परबत ने शीश झुकाया
फौलादी हैं सीने अपने फौलादी हैं बाँहें
हम चाहें तो चट्टानों में पैदा कर दें राहें

- (क) इस गीत के गीतकार/कवि का लिखिए। (1)
- (ख) मिलकर कदम बढ़ाने से क्या होगा ? (2)
- (ग) हमारे सीने और बाँहों को कवि ने किसके समान बताया है और इससे हम क्या कर सकते हैं ? (2)

09. निम्नलिखित गद्यांश को ध्यानपूर्वक पढ़कर पूछे गए प्रश्नों के उत्तर दीजिए -

गरमी के दिन थे। बाबू जी दफ्तर गए हुए थे। अम्मा दोनों बच्चों को कमरे में सुलाकर खुद सो गई थीं लेकिन बच्चों की आँखों में नींद कहाँ ? अम्मा जी को बहलाने के लिए दोनों दम रोके, आँखे बंद किए, मौके का इंतज़ार कर रहे थे। ज्यों ही मालूम हुआ कि अम्मा अच्छी तरह सो गई, दोनों चुपके से उठे और बहुत धीरे से दरवाजे की सिटकनी खोलकर बाहर निकल आए। अंडों के हिफाज़त की तैयारियाँ होनी लगीं। केशव कमरे से स्टूल उठा लाया, लेकिन उससे जब काम न चला तो नहाने की चौकी लाकर स्टूल के नीचे रखी और डरते-डरते स्कूल पर चढ़ा और कार्निंस तक पहुँच गया।

- (क) इस गद्यांश के लेखक का नाम बताइए। (1)
- (ख) अम्मा के सोने के बाद दोनों बच्चों ने क्या किया ? (2)
- (ग) केशव और श्यामा ने कार्निंस तक पहुँचने के लिए क्या किया ? (2)

10. निम्नलिखित प्रश्नों में से किन्हीं पाँच प्रश्नों के उत्तर लगभग 30-40 शब्दों में दीजिए -

(5x4=20)

- (i) केशन ने श्यामा से चिथड़े, टोकरी और दाना-पानी मँगाकर कार्निंस पर क्यों रखे थे ?
- (ii) लेखिका इतवार की सुबह क्या-क्या काम करती थी ?
- (iii) लेखिका कौन-कौन सी चीज़ें बचपन में मज़ा ले-लेकर खाती थी ? बचपन पाठ के आधार पर लिखिए।
- (iv) केशव और श्यामा ने चिड़िया के अंडों की रक्षा की या नादानी ?
- (v) 'साथी हाथ बढ़ाना' गीत में सीने और बाँहों को फौलादी क्यों कहा है ?

11. अनुमान एवं कल्पना के आधार पर निम्नलिखित प्रश्नों में से किसी एक का लगभग 30-40 शब्दों में उत्तर दीजिए - (3)

- (क) 'नादान दोस्त' पाठ के आधार पर पता कीजिए कि दोनों चिड़िया वहाँ फिर क्यों नहीं आई ? वे कहाँ गई होंगी ?
या
'बचपन' पाठ के आधार पर बताइए कि इतवार की सुबह आप क्या-क्या करते हैं ?

12. निम्नलिखित प्रश्नों के अति संक्षिप्त उत्तर दीजिए - (कोई सात)

(7)

- (i) 'बचपन' पाठ की विधा बताइए।
- (ii) 'नादान दोस्त' पाठ के लेखक का नाम बताइए।
- (iii) प्रचलित रूप लिखिए - परबत, रस्ता।
- (iv) दो किलो अनाज दे दो - (रेखांकित शब्द का विशेषण बताइए)
- (v) 'नादान दोस्त' पाठ में किस मौसम का वर्णन है ?
- (vi) चश्मा लगाने पर लेखिका के भाई ने उन्हें क्या कहकर चिढ़ाया ?
- (vii) 'साथी हाथ बढ़ाना' का क्या अर्थ है ?
- (viii) 'नादान दोस्त' पाठ के आधार पर बताइए चिड़िया ने अंडे कहाँ दिए थे ?
- (ix) 'वह चिड़िया जो' पाठ में चिड़िया किसकी खातिर रस उँड़ेलकर गा लेती है ?

दिल्ली - पब्लिक- स्कूल , भिलाईनगरम्

अर्द्धवार्षिकी परीक्षा - 2022-23



कक्षा - षष्ठी

निर्देशाः - 1.30 होराः

संस्कृतम्

दिनाङ्कः - 07/09/22

पूर्णाङ्कः - 40

परीक्षार्थिनः नाम- _____

कक्षा /वर्गः- _____

अनुक्रमाङ्कः- _____

{1} सः, तौ, ते इत्येतेभ्यः उचितं सर्वनामपदं चित्वा रिक्तस्थानानि पूरयत - $\frac{1}{2} \times 06 = 03$

क) छात्रौ पठतः । _____ पठतः । ख) गजाः चलन्ति । _____ चलन्ति ।

ग) अश्वः धावति । _____ धावति । घ) गायकः गायति । _____ गायति ।

ङ) मयूराः नृत्यन्ति । _____ नृत्यन्ति । च) वानराः कूर्दन्ति । _____ कूर्दन्ति ।

{2} उचितपदानि संयोज्य वाक्यानि रचयत - $\frac{1}{2} \times 06 = 03$

क	ख	उत्तराणि
क) खगः	वहति	_____
ख) मयूराः	गर्जन्ति	_____
ग) सिंहाः	कूजतः	_____
घ) कोकिले	विकसति	_____
ङ) पवनः	नृत्यन्ति	_____
च) पुष्पम्	उत्पतति	_____

{3} उचित-पदैः वाक्यनिर्माणं कुरुत - (तव, आवयोः, अस्माकम्, मम) $1 \times 4 = 04$

क) एतत् _____ गृहम् । ख) _____ मैत्री दृढा ।

ग) एषः _____ विद्यालयः । घ) भारतम् _____ देशः ।

{4} मञ्जूषातः उचितक्रियापदं चित्वा रिक्तस्थानानि पूरयत - $\frac{1}{2} \times 6 = 03$

नृत्यन्ति , गर्जतः , धावति, चलतः , फलन्ति , खादति

(क) गजौ _____ । (ख) वानरः _____ ।

(ग) मयूराः _____ । (घ) सिंहौ _____ ।

(ङ) वृक्षाः _____ । (च) अश्वः _____ ।

{5} कोष्ठकात् उचितं शब्दं चित्वा वाक्यं पूरयत - (उचित शब्द चुनकर लिखें) $\frac{1}{2} \times 4 = 2$

क. _____ चरतः । (अजाः / अजे) ख. _____ सन्ति । (द्विचक्रिके / द्विचक्रिकाः)

ग. _____ उत्पतन्ति । (मक्षिकाः / मक्षिके) घ. _____ अस्ति । (सूचिके / सूचिका)

{6} मञ्जूषातः कर्तृपदं चित्वा रिक्तस्थानानि पूरयत । लेखिका , सिंहाः , पुष्पमालाः 1 X 3 = 3

क) ----- सन्ति । ग) ----- लिखति । ग) ----- गर्जन्ति ।

{7} मञ्जूषातः उचितक्रियापदैः वाक्यानि पूरयत - (क्रियापद लिखें) केवलं - 2 1 X 2 = 2

[लिखामि, पठसि, धावामः]

क) त्वं ----- । ख) अहं ----- । ग) वयं ----- ।

{8} सङ्ख्यानां कृते उचितसंस्कृतपदं मञ्जूषातः चित्वा लिखत - ½ X 6 = 3

एकः, सप्त, त्रयः, षट्, चत्वारः, दश

क) 03. -----

ख) 01. -----

ग) 07. -----

घ) 04. -----

ङ) 06. -----

च) 10. -----

{9} अव्ययपदानाम् अर्थं मेलयत - (अव्ययपदों के अर्थ मिलाओ)


½ x 4 = 2

क	ख	उत्तराणि
तत्र	सब जगह	-----
प्रातः	वहाँ	-----
सर्वत्र	कहाँ	-----
कुत्र	सुबह	-----

{10} चित्राणि दृष्ट्वा मञ्जूषातः चित्वा संस्कृतपदानि लिखत -

½ x 4 = 2

[चन्द्रः, छत्रम्, चटका, गजः]



{11} उचित-धातुरुपैः रिक्तस्थानानि पूरयत -

½ X 10 = 5

पुरुषः	एकवचनम्	द्विवचनम्	बहुवचनम्
प्रथमः	-----	पठतः	पठन्ति
मध्यमः	खेलसि	-----	खेलथ
उत्तमः	लिखामि	-----	लिखामः
प्रथमः	-----	हसतः	-----
मध्यमः	धावसि	-----	-----
उत्तमः	-----	भ्रमावः	-----
प्रथमः	गच्छति	-----	गच्छन्ति

{12} उचित-शब्दरूपैः रिक्तस्थानानि पूरयत - (केवलं 10)

½ X 10 = 05

विभक्तिः	एकवचनम्	द्विवचनम्	बहुवचनम्
प्रथमा	_____	बालिके	_____
द्वितीया	_____	_____	बालिकाः
तृतीया	बालिकया	_____	बालिकाभिः
चतुर्थी	_____	बालकाभ्याम्	_____
पंचमी	बालकात्	_____	बालकेभ्यः
षष्ठी	पुष्पस्य	_____	पुष्पाणाम्
सप्तमी	_____	पुष्पयोः	_____
संबोधनम्	हे बालक !	हे _____ !	हे बालकाः !

{13} संस्कृतभाषायाम् अनुवादं कुरुत । (संस्कृत भाषा में अनुवाद करें) (कोई - 3) 1 X 3 = 3

- क) बालक पढ़ता है । _____
- ख) मैं हँसता हूँ । _____
- ग) तुम खेलते हो । _____
- घ) बालिकाएँ लिखती हैं । _____
- ङ) हम सब पढ़ते हैं । _____



GENERAL INTSTURCTIONS:

- All questions are compulsory.
- The question paper consists of 30 questions divided into 4 sections: Section A, B, C & D.
Section A contains 6 questions of 1 mark each
Section B contains 6 questions of 2 marks each
Section C contains 10 questions of 3 marks each
Section D contains 8 questions of 4 marks each
- There is no overall choice. However, internal choice has been provided in two questions of 1 mark each, 2 questions of 2 marks each, 4 questions of 3 marks each and 3 questions of 4 marks each.
- Drawings are not to the scale.

Section-A

1. Use the given digits without repetition and make the greatest 4 digit number: 1, 7, 6, 2.
2. Arrange the given numbers in ascending order: 847, 9754, 8320, 571.

OR

Arrange the given numbers in descending order: 5000, 7500, 85400, 7861.

3. Which is the smallest whole number?
4. Find the value: $100 \times 7 + 100 \times 3$
5. Write the successor of: 1099999 OR Write the predecessor of: 10000
6. Which of the following will not represent zero:
(a) $0 + 1$ (b) 0×0 (c) $\frac{0}{2}$ (d) $\frac{10-10}{2}$.

Section-B

7. Total number of animals in five villages are as follows:
Village A: 80, Village B:120, Village C: 90, Village D:40, Village E: 60
(a) Which village has the maximum number of animals?
(b) Which village has more animals, Village A or Village C?
8. Draw any polygon and shade its interior.

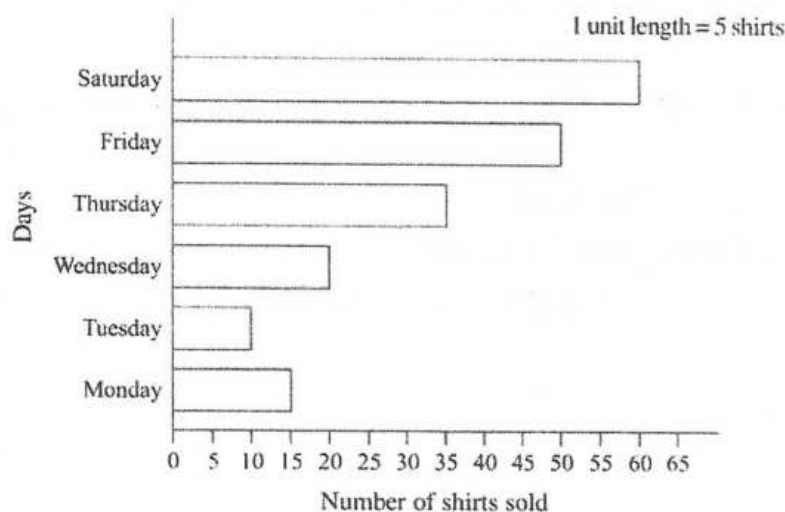
OR

How many lines can pass through (a) one given point? (b) two given points?

9. Find the HCF of 18, 48 OR Find the LCM of 24 and 90.
10. Find 12×35 using distributivity.
11. To stitch a shirt, 2m 15 cm cloth is needed. Out of 40m cloth, how many shirts can be stitched and how much cloth will remain?
12. Insert commas suitably and write the names according to the Indian system of numeration: 99900046.

Section-C

13.



Now answer the following questions:

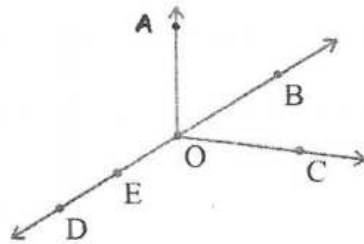
- On which day were the maximum number of shirts sold? How many shirts were sold on that day?
- On which day were the minimum number of shirts sold?
- How many shirts were sold on Thursday?

14. Catherine threw a dice 40 times and noted the number appearing each time as shown below:

1	3	5	6	6	3	5	4	1	6
2	5	3	4	6	1	5	5	6	1
1	2	2	3	5	2	4	5	5	6
5	1	6	2	3	5	2	4	1	5

Make a table and enter the data using tally marks. Find those numbers that appear an equal number of times.

15.



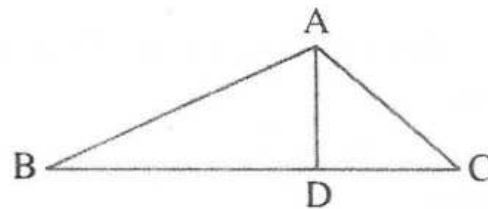
Use the figure to name:

- Five points
- A line
- Five line segments

OR

Draw any circle and mark: (a) a radius (b) a diameter (c) a segment

16.



Identify three triangles in the above figure.

17. Determine the smallest 3 digit number which is exactly divisible by 6, 8 and 12.

OR

Determine the greatest 3 digit number exactly divisible by 8, 10 and 12.

- Write five pairs of prime numbers less than 20 whose sum is divisible by 5.
- How many whole numbers are there between 32 and 53?
- Find the product using suitable property: 738×103 .

OR

The school canteen charges Rs. 20 for lunch and Rs. 4 for milk for each day. How much money do you spend in 5 days on these things?

21. A vessel has 4 litres and 500 ml of curd. In how many glasses, each of 25 ml capacity, can it be filled?

OR

The distance between the school and a student's house is 1 km 875m. Every day she walks both ways. Find the total distance covered by her in six days.

22. Fill in the blanks:

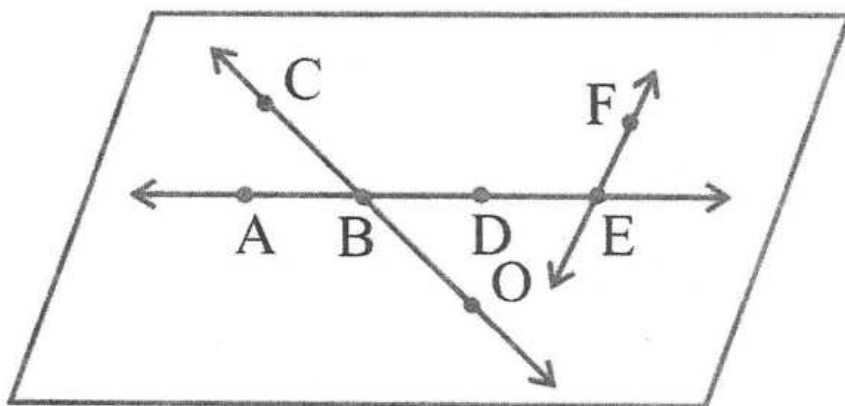
(a) 1 lakh = _____ ten thousand (b) 1 crore = _____ ten lakh (c) 1 million = _____ lakh

Section-D

23. Draw a rough sketch of a quadrilateral KLMN and state:

(a) two pairs of opposite sides (b) two pairs of opposite angles

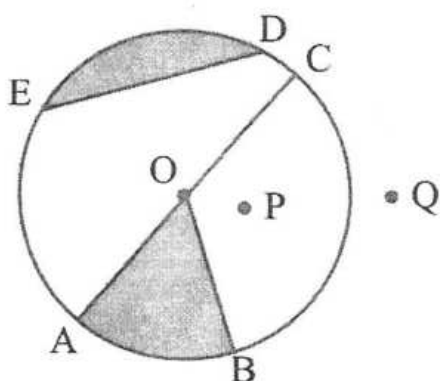
24.



Use the figure to name:

- (a) Line containing point E
 (b) line passing through A
 (c) line on which O lies
 (d) two pairs of intersecting lines

OR



From the figure, identify:

- (a) a sector (b) a point in its interior (c) a point in its exterior (d) a segment

25. The number of mathematics books sold by a shopkeeper on six consecutive days are shown below:

Days	Sunday	Monday	Tuesday	Wednesday	Thursday	Friday
Number of books sold	65	40	30	50	20	70

Draw a bar graph to represent the above information choosing the scale of your choice.

26. The length, breadth and height of a room are 825cm, 675cm and 450cm respectively. Find the longest tape which can measure the three dimensions of the room exactly.
 27. Determine if 25110 is divisible by 45.

OR

Find the prime factorisation of:

- (a) 980 (b) 720

28. A vendor supplies 32 litres of milk to a hotel in the morning and 68 litres of milk in the evening. If the milk costs Rs. 45 per litre, how much money is due to the vendor per day?

OR

A taxi driver filled his car petrol tank with 40 litres of petrol on Monday. The next day, he filled the tank with 50 litres of petrol. If the petrol costs Rs. 44 per litre, how much did he spend in all on petrol?

29. A machine, on an average manufactures 2,825 screws a day. How many screws did it produce in the month of January 2006?
 30. Number of persons in various age groups in a town is given in the following table:

Age group (in years)	1-14	15-29	30-44	45-59	60-74	75 & above
Number of persons	2 lakhs	1 lakh 60 thousands	1 lakh 20 thousands	1 lakh 20 thousands	80 thousands	40 thousands

Draw a bar graph to represent the above information. (take 1 unit length = 20 thousands)

* * * * *



**DELHI PUBLIC SCHOOL,
BHILAI**

Date : 14.09.2022 FIRST TERM EXAMINATION-2022-23
Class : VI Subject : Social Science

Time : 3 Hrs.
Max. Marks : 80

General Instructions:

1. There are 32 questions. All questions are compulsory.
2. Marks of each question is indicated against it.
3. Questions from Sl. No 1-14 are very short answer type questions. Each question carries 1 mark.
4. Questions from Sl. No 15-26 are short answer type questions of 3 marks each.
5. Questions from Sl. No. 27-30 are long answer type questions of 5 marks each.
6. Question No.31 is a diagram based question of 5 marks.
7. Question No. 32 is a map-based question on History. Tie map inside the answer sheet.

- Q.1. Who was the founder of Christianity? 1
- Q.2. Which tool was used to dig the earth for turning the soil and planting seeds? 1
- Q.3. Name a special tank located in Mohenjodaro. 1
- Q.4. Which language was used for writing Rigveda? 1
- Q.5. Name the place where rice was grown for the first time. 1
- Q.6. Name the planet also known as 'Earth's Twin'. 1
- Q.7. What are Meteoroids made up of? 1
- Q.8. What is the True model of the earth called? 1
- Q.9. When do the longest day and the shortest night occur in the Northern hemisphere? 1
- Q.10. Which colour is used for showing Mountains on a Map? 1
- Q.11. What is a Universal Adult franchise? 1
- Q.12. Name the religion which reached Tibet via Ladakh. 1
- Q.13. Which kind of Government is ruled by a King or Queen? 1
- Q.14. What are the members of the Panchayat called? 1
- Q.15. What do you mean by Megaliths? What are the main features of Megalith burials? 1+2=3
- Q.16. Why were metals, writing and wheel important for the Harappans? 3

OR

- In what ways is the city of Dholavira different from other Harappan Cities?
- Q.17. Mention any three subjects on which books were written in the past. 3
- Q.18. Who were Dasas and Dasis? What was their position in society? 1+2=3
- Q.19. What is a Leap year? 3
- Q.20. How does a Planet differ from a Star? 3
- Q.21. What are the three heat zones of the Earth? 3
- Q.22. Why do we see only one side of the moon always? 3

OR

- Why is earth called a unique planet?
- Q.23. What do you mean by Prejudice? Give two examples. 1+2=3
- Q.24. What is Suffrage movement? How did it accomplish? 1+2=3
- Q.25. Why do you think the government need to make rules for everyone in the form of law? 3
- Q.26. How had Indian diversity been recognised as its source of Strength? Explain with examples. 1+2=3

OR

- Write any 3 differences between Kerala and Ladakh.
- Q.27. Explain the conditions that helped Magadha to become the most powerful Mahajanapadas. 5
- Q.28. Write any five features of Harappan cities. 5

OR

- Explain the house pattern and drainage system of Harappan cities.
- Q.29. What do you mean by the scale of the Map? What are the three components of a Map? 2+3=5

OR

- What do mean you by Conventional Symbols? Distinguish between a Map and a plan.
- Q.30. What is Panchayati Raj system? What are the three levels or tiers of the Panchayati Raj system? 2+3=5

OR

- Who is the Secretary of Gram Sabha? What are the sources of funds or income for a Gram panchayat?
- Q.31. Draw a neat and labelled diagram of the 'Solar System'. 5
- Q.32. Locate the following places on the given political Map of India (any five) 5
- (1) Kalibangan (2) Rajgriha (3) Ujjain
- (4) Magadha (5) Vajji (6) Lothal



General Instructions:

- There are 38 questions in all. All questions are compulsory.
- There is no overall choice. However, internal choice has been provided in Question No. 25, 34 and all the questions of 5 marks category only.
- Q. No. 1 to 10 are, Multiple Choice Questions (MCQ) carry 1 mark each.
- Q. No. 11 to 16 are, very short answer type questions carry 1 mark each.
- Q. No. 17 to 25 are, short answer type questions carry 2 marks each.
- Q. No. 26 to 34 are, short answer type questions carry 3 marks each.
- Q. No. 35 is paragraph based questions (any four parts are to be answered out of five) carry 4 marks.
- Question no. 36 to 38 are, Long answer type questions carry 5 marks each.

- Q1. Egg laying animal is (01)
(a) bee (b) goose (c) goat (d) buffalo
- Q2. Minerals and vitamins present in food are (01)
(a) body building (b) roughage (c) protective (d) energy giving
- Q3. Honeybee makes honey from (01)
(a) nectar (b) petals (c) pollen (d) bud
- Q4. Paheli wants to present her friend with a gift made of plant fibre. Which out of the following will she select? (01)
(a) Nylon scarf (b) Woollen shawl (c) Silk saree (d) Jute bag
- Q5. Which of the following materials is not lustrous? (01)
(a) Gold (b) Silver (c) Wood (d) Diamond
- Q6. Which of the following is not a reversible change? (01)
(a) Melting of wax (b) Lighting a match stick (c) Dissolving sugar in water (d) Freezing water to ice
- Q7. Which part of the jute plant is used for getting jute fibre? (01)
(a) Flower (b) Stem (c) Fruit (d) Leaf
- Q8. Snails move with the help of a (01)
(a) hand (b) muscular foot (c) mouth (d) eye
- Q9. Which part of the plant grows in the soil? (01)
(a) Stem (b) Leaf (c) Root (d) Seed
- Q10. Paheli bought some vegetables such as french beans, lady's finger, green chillies, brinjals and potatoes all mixed in a bag. Which of the following methods of separation would be most appropriate for her to separate them? (01)
(a) Handpicking (b) Threshing (c) Winnowing (d) Sieving
- Q11. Define condensation. (01)
- Q12. What are yarns made up of? (01)
- Q13. All living things need the same kind of food. Why? (01)
- Q14. Name two gases that dissolve in water. (01)
- Q15. Name any two sources of fats. (01)
- Q16. If a plant has fibrous root, what type of venation are its leaves likely to have? (01)
- Q17. What is roughage? (02)
- Q18. Write two main functions of leaves. (02)
- Q19. What is winnowing? Where is it used? (02)
- Q20. Why can our elbow not move backwards? (02)
- Q21. What are opaque objects? Give two examples. (02)
- Q22. What do you mean by the term 'edible'? Give two examples. (02)
- Q23. How did early man cover his body before fibres were discovered? (02)
- Q24. What are the changes that appear in an incense stick when it is burnt? Is it a reversible change? (02)

Q25. State two functions of ribs? (02)

OR

Write a short note on fixed joint.

Q26. Give three adaptations in a bird that helps them fly? (03)

Q27. Write an activity to test the presence of starch in food.(No diagram) (03)

Q28. Distinguish between reversible change & irreversible change.(Any three) (03)

Q29 (i) How are materials grouped? (03)

(ii) What role does water play in the functioning of our body?

Q30 (i) How will you prepare common salt from marine water? (03)

(ii) Give two situations where it is necessary to separate the mixture from its components?

Q31 (i) What happens if we take some wax in a pan & heat it? What kind of change is this? (03)

(ii) How is the iron blade of the tool used for digging the soil fixed in the wooden handle?

Q32 (i) Name the male reproductive part of a flower. What are its sub - parts? (03)

(ii) Name the female reproductive part of a flower. What are its sub - parts?

Q33. Explain the differences between herbivores, carnivores and omnivores. Give one example of each. (03)

Q34. Write three functions of a human skeleton? (03)

OR

Write three functions of a spine?

Q35. Read the following paragraph and answer the following questions. (Any four) (04)

Khadi, derived from khaddar is a hand-spun and woven natural fibre promoted by Mahatma Gandhi. Khadi is broadly manufactured in two steps, first by converting the fibre into yarns with the use of tools like spinning wheel and then weaving it into the fabric using looms. The first piece of the hand-woven cloth was manufactured in the Sabarmati Ashram during 1917-18. The coarseness of the cloth led Gandhi to call it khadi. Bhagalpur is the primary centre of its production, followed by other places in Bihar, Jharkhand and Malda in West Bengal.

The cloth is made from cotton, but it may also include silk or wool, which is all spun into yarn on a charkha. It is a versatile fabric that remains cool in summer and warm in winter. To improve its appearance, khadi is sometimes starched to give it a stiffer feel. It is widely accepted in various fashion circles. Popular dresses are made using khadi cloth such as dhoti, kurta and handloom saris. Khadi material is a body-friendly fabric that does not cause any allergies or irritations, unlike other synthetic fabrics.

(i) Who introduced Khadi fabric?

(ii) Why should we wear khadi clothes?

(iii) Where is Khadi made in India?

(iv) What is the texture of khadi?

(v) Name the types of dresses made from Khadi cloth?

Q36 (i) What are deficiency diseases? Give two examples. (05)

(ii) Name the major nutrients in our food.

(iii) Name a vitamin required for maintaining good eyesight.

OR

(i) What is balanced diet? Give one example.

(ii) State the functions of following nutrients in our body?

(a) Carbohydrates (b) Fats (c) Proteins

Q37 (i) How will you separate sand and water from their mixture? Explain it. (05)

(ii) How will you separate a mixture of grass, pebbles & sand? Explain it.

OR

(i) What is threshing? What are the three different methods of threshing?

(ii) How will you separate husk or dirt particles from a given sample of pulses before cooking?

Q38 (i) Draw a neat and well labelled diagram of a leaf. (05)

(ii) Name the part of the plant which produces food. Name this process.

OR

(i) Draw a neat and well labelled diagram of parts of a flower.

(ii) Write two functions of stem in a plant.



DELHI PUBLIC SCHOOL, BHILAI

Date : 08.09.2022

FIRST TERM EXAMINATION-2022

Time : 50 Minutes

Class : VI

Subject : General Knowledge

Max. Marks : 50

Name of the student: _____

Class/Sec. _____ Roll No. _____

Invigilator's Signature _____

Marks obtained : ____/50

GENERAL INSTRUCTIONS:

- (i) All questions are compulsory.
- (ii) Each question carries 1 mark.

(I) Answer the following :-

(1x10=10)

- (1) This mammal is famous for its large colonies. _____
- (2) This branch of engineering is related to ships and their equipments. _____
- (3) This branch of knowledge deals with ancient cultures and periods of history. _____
- (4) In this adventure sport, swimmers go deep below the surface of water and explore sea life. _____
- (5) The fruits of amla plant are used for remedy of this disease. _____
- (6) Name the highest water fall of the earth. _____
- (7) This mountain peak is a natural barrier between Indian Sub Continent and Northern Asia. _____
- (8) Who is the author of the book, Mr. Sampat ? _____
- (9) In this asana, the person bends backwards from standing position, keeping hands close to the ears. _____
- (10) The digestive system of this scavenger can breakdown even bones and horns. _____

(II) Match column A with Column B.

(1x10=10)

A	B	Correct Answer
(1) The capital of Syria	- (a) Narmada	_____
(2) Bard of Avon	- (b) Daisy	_____
(3) Badrinath	- (c) Insects	_____
(4) Entomology	- (d) Psychiatrist	_____
(5) Fibre and fabric	- (e) Wenquan	_____
(6) Sarangi	- (f) William Shakespeare	_____
(7) Highest town in eastern and northern Hemisphere	- (g) Damascus	_____
(8) Flower of innocence	- (h) Ram Narayan	_____
(9) Specialist treating mental disorder	- (i) Alaknanda	_____
(10) Jabalpur	- (j) Textile	_____

(III) Fill in the blanks

(1x10=10)

- (1) _____ flower symbolizes the gesture of respect.
- (2) _____ is the principal public square of Venice and is named as 'drawing room of Europe'.
- (3) _____ is the highest city in the world and has no sewage system.
- (4) Seeds of poppy plant are used as remedy for _____.
- (5) _____ is the most dangerous insect found in Australia.
- (6) The most confusing border in the world is between _____ and Belgium.
- (7) _____ are stored in the tin container and this food is responsible for diabetes and heart disease.
- (8) _____ is one of the rarest minerals in the world and it is very difficult to locate this mineral.
- (9) _____ is the only organ of the body which regenerates itself even after being removed completely.
- (10) Vijayawada city of Andhra Pradesh is situated on the bank of _____ river.

(IV) Identify the following personalities :

(1x5=05)

- (1) He is the author of the book 'The Village'. _____
- (2) He was the 1st Deputy PM of India. _____
- (3) He was well known as Frontier Gandhi. _____
- (4) He is a renowned Indian classical Sarod player. _____
- (5) She received the Bharat Ratna award in 1980. _____

(V) Name the branches of science related to the following subjects :

(1x5=05)

- (1) Earth and its composition _____
- (2) Animal Behaviour _____
- (3) Nervous system _____
- (4) Fish _____
- (5) Weather and related phenomena _____

(VI) Name the following :

(1x5=05)

- (1) This is the biggest single structure made by organisms. _____
- (2) It is the oldest city in Western Europe. _____
- (3) This is the only bird that hunts by its sense of smell. _____
- (4) In this adventure sport, people fly in big hot air balloons. _____
- (5) The leaves of this plant are used for the remedy of bronchitis. _____

(VII) Current Affairs:

(1x5=05)

- (1) Who is the Chief Minister of Uttarakhand? _____
- (2) Which city is known as Prayag of Chhattisgarh? _____
- (3) What is the full form of WHO?
- (4) Which Bollywood movie featuring Taapsee Pannu is the biopic of a famous woman cricketer?

- (5) Which sport is P.V. Sindhu associated with? _____



DELHI PUBLIC SCHOOL, BHILAI

Date : 08.09.2022
Class : VI

FIRST TERM EXAMINATION-2022
Subject : General Knowledge

Time : 50 Minutes
Max. Marks : 50

Name of the student: _____ Class/Sec. _____ Roll No. _____

Invigilator's Signature _____ Marks obtained : ____/50

GENERAL INSTRUCTIONS:

- (i) All questions are compulsory.
- (ii) Each question carries 1 mark.

(I) Answer the following :- (1x10=10)

- (1) This mammal is famous for its large colonies. _____
- (2) This branch of engineering is related to ships and their equipments. _____
- (3) This branch of knowledge deals with ancient cultures and periods of history. _____
- (4) In this adventure sport, swimmers go deep below the surface of water and explore sea life. _____
- (5) The fruits of amla plant are used for remedy of this disease. _____
- (6) Name the highest water fall of the earth. _____
- (7) This mountain peak is a natural barrier between Indian Sub Continent and Northern Asia. _____
- (8) Who is the author of the book, Mr. Sampat ? _____
- (9) In this asana, the person bends backwards from standing position, keeping hands close to the ears. _____
- (10) The digestive system of this scavenger can breakdown even bones and horns. _____

(II) Match column A with Column B. (1x10=10)

A	B	Correct Answer
(1) The capital of Syria	- (a) Narmada	_____
(2) Bard of Avon	- (b) Daisy	_____
(3) Badrinath	- (c) Insects	_____
(4) Entomology	- (d) Psychiatrist	_____
(5) Fibre and fabric	- (e) Wenquan	_____
(6) Sarangi	- (f) William Shakespeare	_____
(7) Highest town in eastern and northern Hemisphere	- (g) Damascus	_____
(8) Flower of innocence	- (h) Ram Narayan	_____
(9) Specialist treating mental disorder	- (i) Alaknanda	_____
(10) Jabalpur	- (j) Textile	_____

(III) Fill in the blanks

(1x10=10)

- (1) _____ flower symbolizes the gesture of respect.
- (2) _____ is the principal public square of Venice and is named as 'drawing room of Europe'.
- (3) _____ is the highest city in the world and has no sewage system.
- (4) Seeds of poppy plant are used as remedy for _____.
- (5) _____ is the most dangerous insect found in Australia.
- (6) The most confusing border in the world is between _____ and Belgium.
- (7) _____ are stored in the tin container and this food is responsible for diabetes and heart disease.
- (8) _____ is one of the rarest minerals in the world and it is very difficult to locate this mineral.
- (9) _____ is the only organ of the body which regenerates itself even after being removed completely.
- (10) Vijayawada city of Andhra Pradesh is situated on the bank of _____ river.

(IV) Identify the following personalities :

(1x5=05)

- (1) He is the author of the book 'The Village'. _____
- (2) He was the 1st Deputy PM of India. _____
- (3) He was well known as Frontier Gandhi. _____
- (4) He is a renowned Indian classical Sarod player. _____
- (5) She received the Bharat Ratna award in 1980. _____

(V) Name the branches of science related to the following subjects :

(1x5=05)

- (1) Earth and its composition _____
- (2) Animal Behaviour _____
- (3) Nervous system _____
- (4) Fish _____
- (5) Weather and related phenomena _____

(VI) Name the following :

(1x5=05)

- (1) This is the biggest single structure made by organisms. _____
- (2) It is the oldest city in Western Europe. _____
- (3) This is the only bird that hunts by its sense of smell. _____
- (4) In this adventure sport, people fly in big hot air balloons. _____
- (5) The leaves of this plant are used for the remedy of bronchitis. _____

(VII) Current Affairs:

(1x5=05)

- (1) Who is the Chief Minister of Uttarakhand? _____
- (2) Which city is known as Prayag of Chhattisgarh? _____
- (3) What is the full form of WHO?
- (4) Which Bollywood movie featuring Taapsee Pannu is the biopic of a famous woman cricketer?

- (5) Which sport is P.V. Sindhu associated with ? _____



DELHI PUBLIC SCHOOL, BHILAI

Date : 06.09.2022

FIRST TERM EXAMINATION-2022

Time : 1 ½ Hrs.

Class : VI

Subject : Information and Communication Technology

Max. Marks : 50

Multiple Choice Questions:

(1x10=10)

- Which of the following is a microcomputer?
a. Desktop b. PDA c. PDP-11 d. DEC 10
- Which of the following blocks is used to hide the sprite from the stage?
a. Show b. hide c. escape d. visible
- Which of the following determines how your presentation moves from one slide to the next?
a. animation b. deletion c. creation d. transition
- Which of the following features is used to locate a word in a document?
a. find b. search c. replace d. go to
- Which option of Format menu allows you to add borders to the selected cells?
a. Borders b. cells c. Colors d. Cell Border
- Which type of computer operates by measuring instead of counting?
a. Digital b. Analog c. Hybrid d. None of these
- Which of the following are used to hold values?
a. Blocks b. operators c. Variables d. Sprites
- Which of the following is a set of predefined layouts that can be used to add a professional touch to your presentation?
a. background b. theme c. template d. animation
- In which margin a header is printed in the document?
a. top b. left c. bottom d. right
- Which of the following commands in the Toolbar is used to set the text color in a cell?
a. Font Color b. Background Color c. Font d. Color

Fill in the Blanks:

(1x5=5)

- In Scratch the variable can be created usingblocks.
- manages computer resources.
- A is a collection of different worksheets.
- Header is placed at the top of a
- Impress is used to create effective

Write 'T' for true and 'F' for False

(1x5=5)

- PDP-11 is a supercomputer.
- To create a new presentation, we click the File menu.
- A footer is printed in the bottom margin.
- We can format numbers in a cell.
- All the blocks in scratch are of same colour.

Long answer questions:

- What is formatting? 2
- What is spreadsheet? 2
- What is the use of variable block in scratch? 2
- What is minicomputer? 2
- Define digital computer. Give any two examples of it. 3
- What is system software? What are the different types of system software? 3
- Write the steps to start the slide show from the current slide. 3
- Give one difference between slide transition and animation. 3
- Write the use of the following blocks in scratch.
Answer, Repeat, Repeat Until, Forever, Set 5
- Write the steps to use the Find and Replace feature 5